



CALCULUS III
(103105)
WORKBOOK

ASST. PROF. DR. ECKART SCHULZ

SCHOOL OF MATHEMATICS

SURANAREE UNIVERSITY OF TECHNOLOGY

APRIL 2552

CONTENTS

POLAR COORDINATES	1
QUADRIC SURFACES	11
ITERATED INTEGRALS	15
DOUBLE INTEGRALS OVER RECTANGLES	21
DOUBLE INTEGRALS OVER ARBITRARY REGIONS.....	26
TRIPLE INTEGRALS	41
TRIPLE INTEGRALS IN CYLINDRICAL COORDINATES	46
TRIPLE INTEGRALS IN SPHERICAL COORDINATES	50
FIRST ORDER DIFFERENTIAL EQUATIONS	59
SECOND ORDER HOMOGENEOUS EQUATIONS	69
THE METHOD OF UNDETERMINED COEFFICIENTS.....	73
THE METHOD OF VARIATION OF PARAMETERS	80
THE LAPLACE TRANSFORM.....	86

Polar Coordinates

Recall: If (x, y) are the *Cartesian coordinates*, and
 (r, θ) are the *polar coordinates* of a point then

$$\boxed{x = r \cos \theta} \quad \text{and} \quad \boxed{y = r \sin \theta}$$

Also,

$$\boxed{r = \sqrt{x^2 + y^2}} \quad \text{and} \quad \boxed{\tan \theta = \frac{y}{x}} \quad (\text{if } x \neq 0)$$

Exercise 1: Find the polar coordinates of the point $P(x, y)$.
 Then sketch the point using the polar coordinates.

a) $P(x, y) = (1, \sqrt{3})$.

Solution: We use

$$r = \sqrt{\dots + \dots} = \sqrt{\dots + \dots} = \sqrt{\dots} = \dots$$

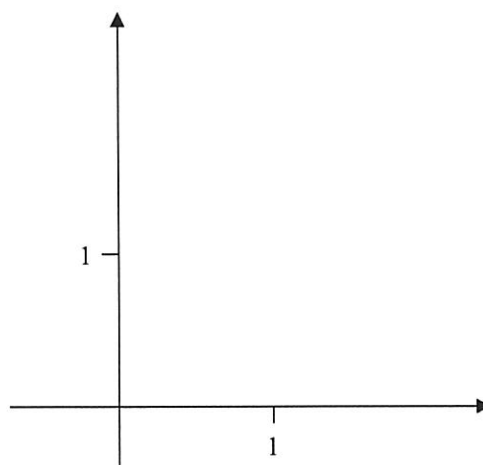
$$\tan \theta = \frac{y}{x} = \frac{\sqrt{3}}{1} = \dots$$

$$\Rightarrow \theta = \tan^{-1}(\dots) = \dots$$

$$\text{or } \theta = \dots + \pi = \dots$$

Because the point P is
 in the quadrant

$$\Rightarrow \theta = \dots$$



Answer: $(r, \theta) = (\dots, \dots)$

b) $P(x, y) = (-3, -3)$.

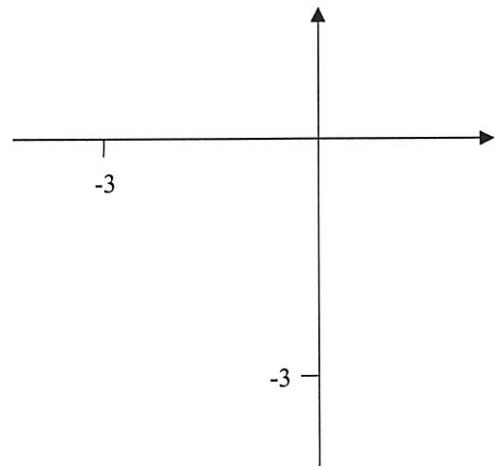
Solution: We use

$$r = \sqrt{\dots + \dots} = \sqrt{\dots + \dots} = \sqrt{\dots} = \dots$$

$$\tan \theta = \frac{y}{\dots} = \frac{\dots}{\dots} = \dots$$

$$\Rightarrow \theta = \tan^{-1}(\dots) = \dots$$

$$\text{or } \theta = \dots + \pi = \dots$$



Because the point P is in the quadrant

$$\Rightarrow \theta = \dots$$

Answer: $(r, \theta) = (\dots, \dots)$

c) $P(x, y) = (0, -2)$.

Solution: We use

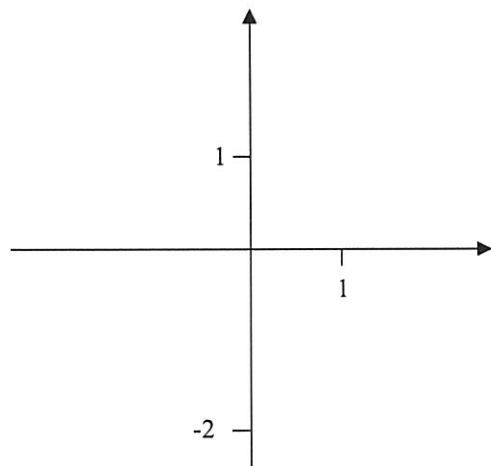
$$r = \sqrt{\dots + \dots} = \sqrt{\dots + \dots} = \sqrt{\dots} = \dots$$

$$\tan \theta = \frac{y}{\dots} = \frac{\dots}{\dots} = \dots$$

We cannot

Because the point P lies on the - axis

$$\Rightarrow \theta = \dots$$



Answer: $(r, \theta) = (\dots, \dots)$

Exercise 2: Find the Cartesian coordinates (x, y) of the point $P(r, \theta)$. Then sketch the point using its polar coordinates.

a) $P(r, \theta) = \left(2, \frac{\pi}{4}\right)$.

Solution: We use

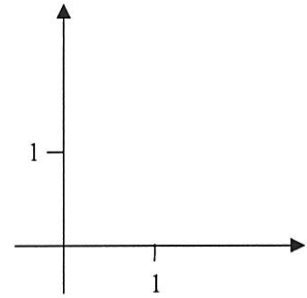
$$x = \dots \cos \theta = \dots$$

$$= \dots = \dots$$

$$y = \dots = \dots$$

$$= \dots = \dots$$

Answer: $(x, y) = (\dots, \dots)$



b) $P(r, \theta) = \left(-3, \frac{2\pi}{3}\right)$.

Solution: We use

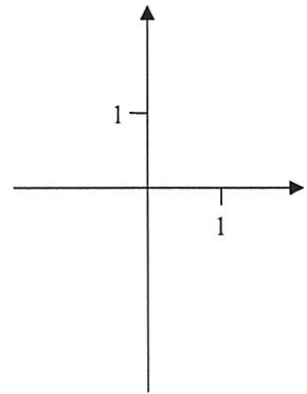
$$x = \dots \cos \theta = \dots$$

$$= \dots = \dots$$

$$y = \dots = \dots$$

$$= \dots = \dots$$

Answer: $(x, y) = (\dots, \dots)$



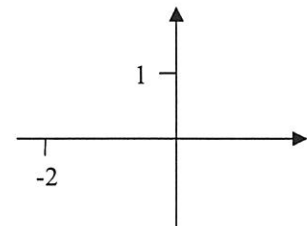
c) $P(r, \theta) = (-2, 0)$.

Solution: We use

$$x = \dots \cos \theta = \dots = \dots$$

$$y = \dots \sin \theta = \dots = \dots$$

Answer: $(x, y) = (\dots, \dots)$



Exercise 3: Change the equation to Cartesian coordinates, and sketch its graph.

a) $\theta = \frac{\pi}{6}$.

Solution: The equation

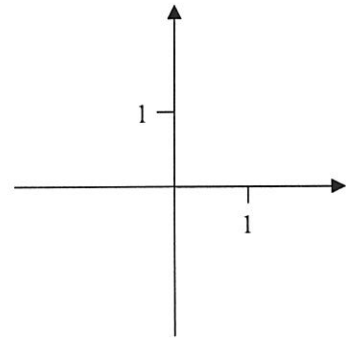
$$\tan \theta = \frac{y}{x} = \dots\dots\dots$$

gives

$$y = \dots\dots\dots$$

Here,

$$y = \dots\dots\dots = \dots\dots\dots$$



Answer: $y = \dots\dots\dots$ (The graph is a $\dots\dots\dots$)

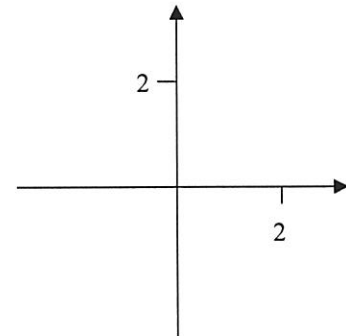
b) $r = 2$.

Solution: We use

$$r = \sqrt{x^2 + y^2} = \dots\dots\dots$$

$$\Rightarrow \sqrt{\dots\dots\dots} = \dots\dots\dots$$

or $\dots\dots\dots = \dots\dots\dots$



Answer: $\dots\dots\dots = \dots\dots$ (The graph is a $\dots\dots\dots$)

c) $r = 2 \sec \theta$.

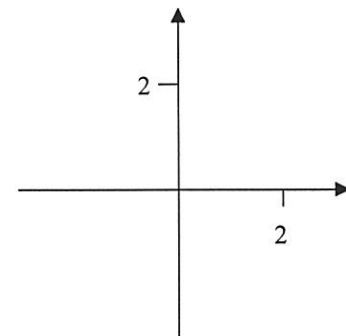
Solution: We multiply by $\dots\dots\dots$

$$\Rightarrow r \dots\dots\dots = 2$$

$$\Rightarrow \dots\dots\dots = 2$$

Answer: $\dots\dots\dots = 2$

(The graph is a $\dots\dots\dots$)



d) $r^2 \sin 2\theta = 2.$ (1)

Solution: Recall that $x = r \cos \theta$ and $y = r \sin \theta.$

Can we discover these in (1) ?

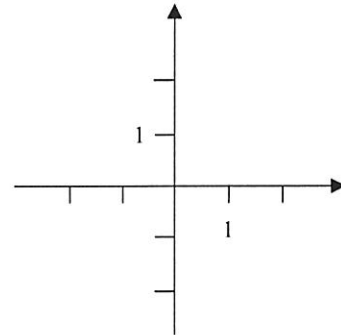
Use the identity: $\sin 2\theta = \dots\dots\dots$

Then (1) becomes

$$r^2 \dots\dots\dots \cos \theta = 2$$

$$(r \dots\dots\dots)(r \dots\dots\dots) = 1$$

$$\dots\dots\dots = 1$$



Answer: $y = \dots\dots\dots$ (The graph is a $\dots\dots\dots$)

e) $r = 8 \sin \theta.$ (2)

Solution: We multiply by $r:$

Then (2) becomes

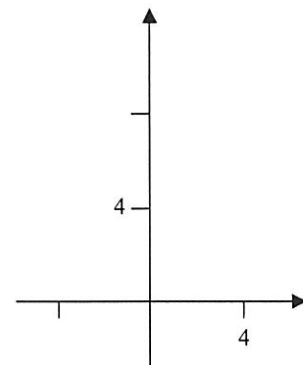
$$\dots\dots\dots = 8r \sin \theta$$

$$\dots\dots\dots = 8 \dots\dots\dots$$

Complete the square.

$$\dots\dots\dots = 0$$

$$\dots\dots\dots = \dots\dots\dots$$



Answer: $x^2 + (y - \dots\dots\dots)^2 = \dots\dots\dots$

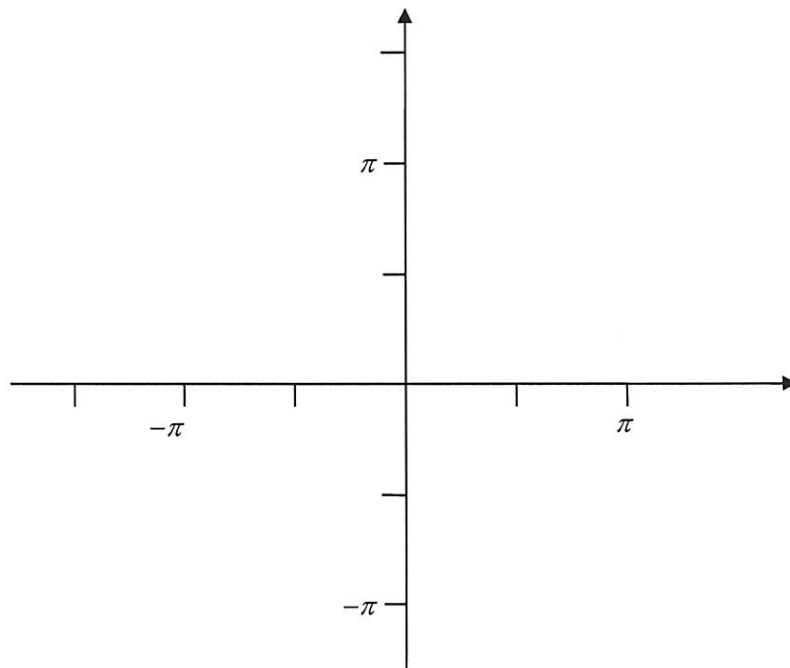
(The graph is a $\dots\dots\dots$ with center $\dots\dots\dots$ and radius $\dots\dots\dots$)

Exercise 4: Sketch the graph of the given equation in polar coordinates.

a) $r = \frac{\theta}{2}$ ($\theta \geq 0$).

Solution: We make a table of values and sketch :

θ	0	$\frac{\pi}{8}$	$\frac{\pi}{4}$	$\frac{\pi}{2}$	$\frac{3\pi}{4}$	π	$\frac{5\pi}{4}$	$\frac{3\pi}{2}$	$\frac{7\pi}{4}$	2π	$\frac{5\pi}{2}$	3π
r												
$\approx r$		0.39		1.57			1.96			2.75		



(The graph is a)

b) $r = 1 + \cos \theta$.

Solution: Let us test for *symmetry*:

About x -axis ?

$$r(-\theta) = 1 + \cos(\dots\dots\dots) = 1 + \cos(\dots\dots\dots) = \dots\dots\dots \Rightarrow \dots\dots\dots$$

About y -axis ?

$$\begin{aligned} r(\pi - \theta) &= 1 + \cos(\dots\dots\dots) = 1 \dots \cos(-\theta) \\ &= 1 \dots \cos(-\theta) = 1 \dots \cos(\theta) \neq \dots\dots\dots \Rightarrow \dots\dots\dots \end{aligned}$$

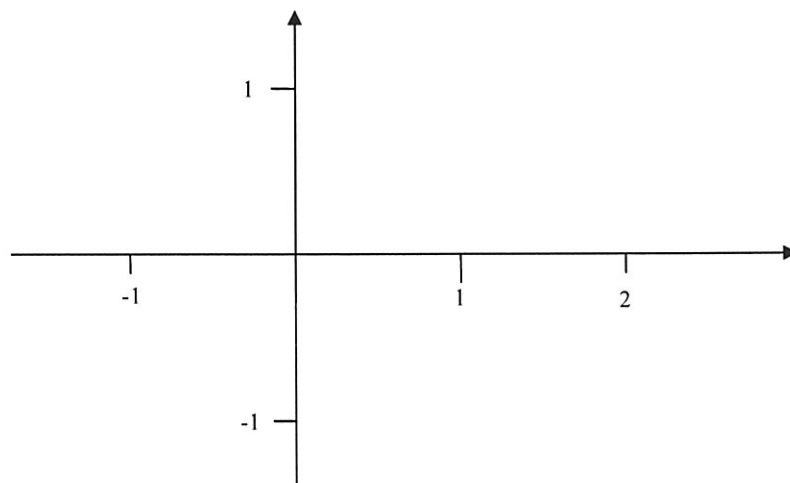
About origin ?

$$r(\theta + \pi) = 1 + \cos(\dots\dots\dots) = 1 \dots \cos(\theta) \neq \dots\dots\dots \Rightarrow \dots\dots\dots$$

\Rightarrow There is symmetry about $\dots\dots\dots$

Table of values (by symmetry, $0 \leq \theta \leq \pi$ is enough) :

θ	0	$\frac{\pi}{6}$	$\frac{\pi}{4}$	$\frac{\pi}{3}$	$\frac{\pi}{2}$	$\frac{2\pi}{3}$	$\frac{3\pi}{4}$	$\frac{5\pi}{6}$	π
r		$1 + \frac{\sqrt{3}}{2}$						$1 - \frac{\sqrt{3}}{2}$	
$\approx r$	2	1.85					0.29		



(The graph is a $\dots\dots\dots$)

c) $r = \sin 4\theta$.

Solution: Let us test for *symmetry*:

About x -axis ?

$$r(-\theta) = \sin(\dots\dots\dots) = \dots\dots\dots \sin(\dots\dots\dots) = \dots\dots\dots r(\theta) \Rightarrow \dots\dots\dots$$

About y -axis ?

$$\begin{aligned} r(\pi - \theta) &= \sin(\dots\dots\dots) = \sin(\dots\dots\dots) \\ &= \sin(\dots\dots\dots) = \dots\dots\dots \sin(\dots\dots\dots) = \dots\dots\dots r(\theta) \end{aligned} \Rightarrow \dots\dots\dots$$

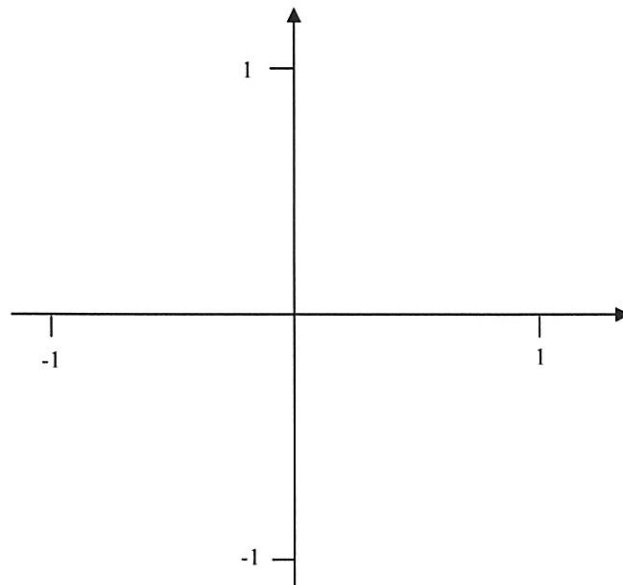
About origin ?

$$\begin{aligned} r(\theta + \pi) &= \sin(\dots\dots\dots) = \sin(\dots\dots\dots) \\ &= \sin(\dots\dots\dots) = \dots\dots\dots r(\theta) \end{aligned} \Rightarrow \dots\dots\dots$$

\Rightarrow There is symmetry about

Table of values (because of the angle 4θ , $0 \leq \theta \leq \pi/2$ is sufficient) :

θ	0	$\frac{\pi}{16}$	$\frac{\pi}{8}$	$\frac{3\pi}{16}$	$\frac{\pi}{4}$	$\frac{5\pi}{16}$	$\frac{3\pi}{8}$	$\frac{7\pi}{16}$	$\frac{\pi}{2}$
r		$\frac{\sqrt{2}}{2}$						$-\frac{\sqrt{2}}{2}$	
$\approx r$		0.71						-0.71	

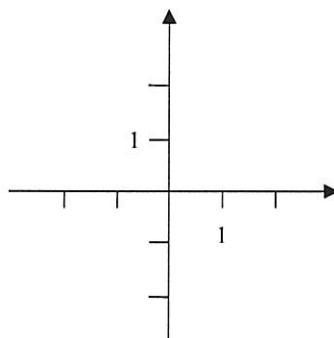


(The graph is a
.....)

Exercise 4: Sketch the given set in the xy -plane.

a) $\left\{ (r, \theta) : 0 \leq r \leq 2, \frac{\pi}{2} \leq \theta \leq \frac{3\pi}{2} \right\}$.

Solution:



(The set is a)

b) $\left\{ (r, \theta) : 0 \leq \theta \leq \frac{\pi}{4}, 0 \leq r \leq 3 \sec \theta \right\}$.

Solution:

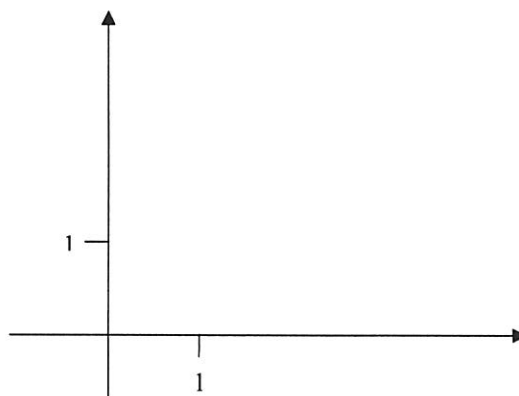
The range of r depends on the value of θ ! The largest value of r is

$$r = 3 \sec \theta$$

$$r \dots\dots\dots = 3$$

$$\dots\dots\dots = 3$$

(a line)



(The set is a)

Additional Exercises:

1) Sketch the graph of the given polar equation

a) $r = -2$

b) $\theta = -\frac{\pi}{6}$

c) $r = 4 \csc \theta$

d) $r = 8 \cos 3\theta$

e) $r = 2 - 2 \sin \theta$

f) $r = 2 + 4 \sin \theta$

2) Sketch the equation and change it to polar form.

a) $x = -3$

b) $y = 2$

c) $x^2 = 8y$

d) $7 = 6x$

e) $xy = 8$

f) $y^2 - x^2 = 4$

3) Change the equation to Cartesian coordinates and sketch its graph.

a) $r = -\csc \theta$

b) $r = -2 \sec \theta$

c) $r^2 \cos 2\theta = 1$

d) $r(\sin \theta - 2 \cos \theta) = 6$

e) $r(\sin \theta + r \cos^2 \theta) = 1$

f) $r = \tan \theta$

Quadric Surfaces

Recall: Equations of some quadric surfaces:

$$\boxed{x^2 + y^2 + z^2 = r^2}$$

sphere with center $(0,0,0)$ and radius r

$$\boxed{z = a(x^2 + y^2)}$$

paraboloid

$$\boxed{z = \sqrt{a(x^2 + y^2)}}$$

cone

Another (non-quadric) surface is

$$\boxed{ax + by + cz = d}$$

plane with normal vector $a\vec{i} + b\vec{j} + c\vec{k}$

Exercise 1: Find the equation of the plane through the points $(2,0,0)$, $(0,1,0)$ and $(0,0,3)$.

Solution: These three points are very simple; we need not use the normal vector !
The *general* equation of a plane is

$$\dots\dots\dots = d$$

Substitute $(x, y, z) = (2, 0, 0)$:

$$\dots\dots\dots = d \Rightarrow a = \dots\dots\dots$$

Substitute $(x, y, z) = (0, 1, 0)$:

$$\dots\dots\dots = d \Rightarrow b = \dots\dots\dots$$

Substitute $(x, y, z) = \dots\dots\dots$:

$$\dots\dots\dots = d \Rightarrow c = \dots\dots\dots$$

We can choose d freely. Choose $d = \dots\dots\dots$.

Then $a = \dots\dots\dots$, $b = \dots\dots\dots$, $c = \dots\dots\dots$

Answer: The equation of the plane is $\dots\dots\dots = \dots\dots\dots$

Exercise 2: Sketch the part of the plane

$$4x + 2y + 3z = 4 \quad (1)$$

which is in the *first octant*. Then find the *trace* of this plane in the *xy*-plane.

Solution: To sketch the plane, we need 3 *points*.

Set $x = y = 0$: $3z = \dots\dots\dots \Rightarrow z = \dots\dots\dots$ (*z*-intercept)

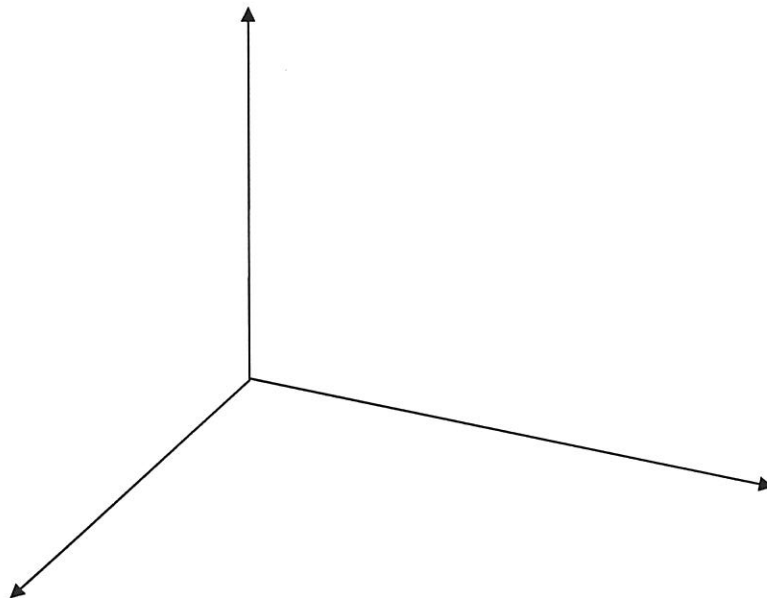
Set $x = z = 0$: $\dots\dots\dots = \dots\dots\dots \Rightarrow y = \dots\dots\dots$ (*y*-intercept)

Set $y = z = 0$: $\dots\dots\dots = \dots\dots\dots \Rightarrow x = \dots\dots\dots$ (*x*-intercept)

Now find the trace in the *xy*-plane. In (1), we set $\dots\dots\dots = 0$:

$$\dots\dots\dots = 4$$

Answer: The trace is the line $\dots\dots\dots = 2$



Exercise 3: Sketch and classify the graph of $z = 4 - x^2 - y^2$.

Solution: First find the traces in the coordinate planes:

Trace in yz -plane: (Set $x = 0$) $\Rightarrow z = \dots\dots\dots$
 ($\dots\dots\dots$)

Trace in xz -plane: (Set $y = 0$) $\Rightarrow z = \dots\dots\dots$
 ($\dots\dots\dots$)

Trace in horizontal plane $z = k$:

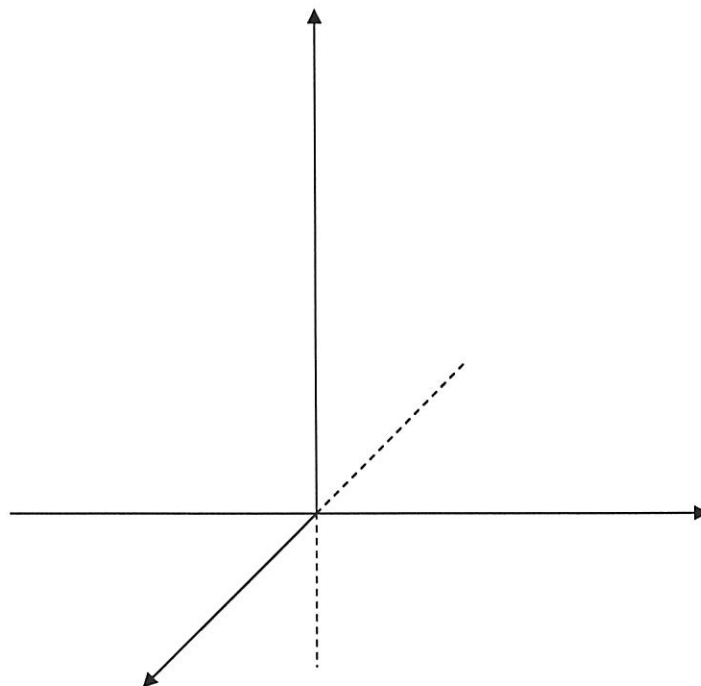
$\Rightarrow k = \dots\dots\dots$

$\Rightarrow x^2 + y^2 = \dots\dots\dots$ ($\dots\dots\dots$, radius $\dots\dots\dots$)

Answer: The graph is a $\dots\dots\dots$

First sketch the parabola $z = \dots\dots\dots$ in the yz -plane.

Then rotate the parabola about the z -axis.



Exercise 4: Sketch the graph of $z = 1 - x^2$. (1)

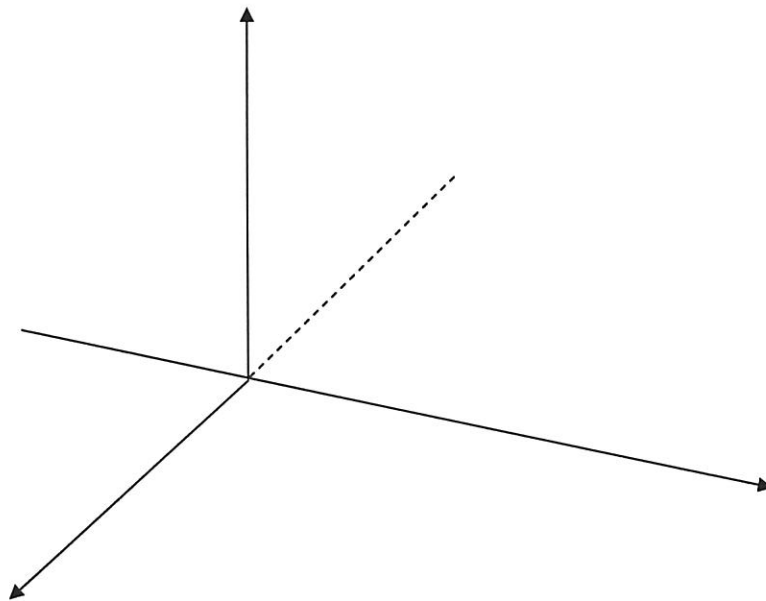
Solution: In *two dimensions*, the graph is a

In *three dimensions*, the graph is a

parallel to (the variable is missing)

First sketch the parabola $z = 1 - x^2$ in the xz -plane.

Then shift in direction of the y -axis.



Additional Exercises:

1) Sketch and classify the following surfaces.

a) $x^2 + y^2 = 9$

d) $z = \sqrt{3(x^2 + y^2)}$

b) $x^2 = 9z$

e) $xz = 1$

c) $z = 3(x^2 + y^2)$

f) $z^2 = \frac{x^2 + y^2}{4}$

2) Sketch the part of the plane which lies in the first octant. Then find its trace in the xy -plane.

a) $3x + 4y + 2z = 12$

b) $x + y + 2z = 1$

Iterated Integrals

Exercise 1: Compute the following iterated integrals:

a)
$$\int_0^1 \int_0^2 (x + y^2) dx dy = \int_0^1 \left[\dots \right]_{x=0}^{x=2} dy$$

$$= \int_0^1 \left(\left[\dots \right] - \left[\dots \right] \right) dy$$

$$= \int_0^1 \left(\dots \right) dy = \left[\dots \right]_{y=0}^{y=1}$$

$$= \dots = \underline{\underline{\dots}}$$

b)
$$\int_0^\pi \int_0^2 x \sin(xy) dy dx = \int_0^\pi \left[\dots \right]_{y=0}^{y=2} dx$$

Recall: $\int \sin ky dy = \dots$

$\Rightarrow \int \sin xy dy = \dots$

$$= \int_0^\pi \left(\dots - \dots \right) dx$$

$$= \left[\dots - \dots \right]_{x=0}^{x=\pi}$$

$$= \dots = \underline{\underline{\dots}}$$

c)
$$\int_0^1 \int_x^{x^2} \frac{y}{x} dy dx = \int_0^1 \frac{1}{x} \int_x^{x^2} y dy dx \quad (\text{think: } x=\text{constant inside})$$

$$= \int_0^1 \frac{1}{x} \left[\dots \right]_{y=\dots}^{y=\dots} dx = \int_0^1 \frac{1}{x} \left(\dots \right) dx$$

$$= \int_0^1 \left(\dots \right) dx = \left[\dots \right]_{\dots}^{\dots}$$

$$= \dots = \underline{\underline{\dots}}$$

d)
$$\int_1^3 \int_3^2 \frac{1}{(x+y)^2} dy dx = \int_1^2 \int_{\dots}^{\dots} \frac{1}{\dots} d_{\dots} dx$$

$u = \dots$ If $y=3$ then $u = \dots$

$du = \dots$ If $y=4$ then $u = \dots$

$$= \int_1^2 \left[\dots \right]_{u=\dots}^{u=\dots} dx = \int_1^2 \left(\dots \right) dx$$

$$= \left[\dots \right]_{\dots}^{\dots}$$

$$= \dots = \underline{\underline{\dots}}$$

e)
$$\int_{\sqrt{\pi}}^{\sqrt{2\pi}} \int_0^{y^3} \sin\left(\frac{x}{y}\right) dx dy = \int_0^1 \int_{\dots}^{\dots} \sin u du dy$$

$u = \dots$	If $x=0$ then $u = \dots$
$du = \dots$	If $x = y^3$ then $u = \dots$

$$= \int_{\sqrt{\pi}}^{\sqrt{2\pi}} \left[\dots \right]_{u=\dots}^{u=\dots} dy = \int_{\sqrt{\pi}}^{\sqrt{2\pi}} \left(\dots \right) dy$$

$$= \left[\dots \right]_{\sqrt{\pi}}^{\sqrt{2\pi}}$$

$$= \left(\dots \right) - \left(\dots \right) = \underline{\dots}$$

f)
$$\int_0^1 \int_0^{y^2} 3y^3 e^{xy} dx dy = \int_0^1 3y^3 \int_0^{y^2} \dots dx dy$$

Recall: $\int e^{kx} dx = \dots \Rightarrow \int e^{xy} dx = \dots$

$$= \int_0^1 3y^3 \left[\dots \right]_{x=\dots}^{x=\dots} dy = \int_0^1 3y^3 \left(\dots - \dots \right) dy$$

$$= \int_0^1 \left(\dots - \dots \right) dy = \left[\dots - \dots \right]_0^1$$

$\int 3y^2 e^{y^3} dy = \int e^{y^3} d(y^3) = \dots$
--

$$= \left(\dots \right) - \left(\dots \right) = \left(\dots \right) = \underline{\dots}$$

g) $\int_0^1 \int_0^1 \frac{xy}{\sqrt{x^2 + y^2 + 1}} dx dy = \int_0^1 \int_{\dots}^{\dots} \frac{1}{2} \frac{\dots}{\dots} du dy$

$u = \dots$	If $x=0$ then $u = \dots$
$du = \dots$	If $x=1$ then $u = \dots$

$$= \int_0^1 \int_{\dots}^{\dots} y \frac{1}{2} \frac{\dots}{\dots} du dy = \int_0^1 \left[\dots \right]_{u=\dots}^{u=\dots} dy$$

$$= \int_0^1 \left(\dots - \dots \right) dy$$

↑	↑
$u = \dots$ $du = \dots$	$u = \dots$ $du = \dots$

$$= \int_{\dots}^{\dots} \dots du - \int_{\dots}^{\dots} \dots du$$

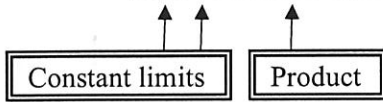
$$= \left[\dots \right]_{\dots}^{\dots} - \left[\dots \right]_{\dots}^{\dots}$$

$$= \left(\dots \right) - \left(\dots \right)$$

$$= \dots = \dots = \underline{\underline{\dots}}$$

Recall:

$$\int_a^b \int_c^d f(x) g(y) dy dx = \int_a^b f(x) dx \cdot \dots\dots\dots$$



Exercise 2: Compute the following iterated integrals:

a)
$$\int_0^\pi \int_0^{\pi/2} \sin x \cos y dy dx = \int_0^\pi \dots\dots\dots dx \cdot \int_0^{\pi/2} \dots\dots\dots dy$$

$$= \left[\dots\dots\dots \right]_0^\pi \cdot \left[\dots\dots\dots \right]_{\dots\dots\dots}^{\dots\dots\dots}$$

$$= \left(\dots\dots\dots - \dots\dots\dots \right) \cdot \left(\dots\dots\dots - \dots\dots\dots \right)$$

$$= \dots\dots\dots = \underline{\underline{\dots\dots\dots}}$$

b)
$$\int_0^1 \int_0^2 xye^{x^2+y^2} dx dy = \int_0^1 \int_0^2 xye^{x^2} \dots\dots\dots dx dy$$

$$= \int_0^1 \dots\dots\dots d\dots\dots \cdot \int_0^2 \dots\dots\dots d\dots\dots$$

Use: $\int 2xe^{x^2} dx = \int e^{x^2} d(x^2) = \dots\dots\dots$

$$= \left[\dots\dots\dots \right]_{\dots\dots\dots}^{\dots\dots\dots} \cdot \left[\dots\dots\dots \right]_0^2$$

$$= \frac{1}{4} \left(\dots\dots\dots - \dots\dots\dots \right) \cdot \left(\dots\dots - \dots\dots \right) = \underline{\underline{\dots\dots\dots}}$$

Additional Exercises:

1) Find the following iterated integrals:

$$\text{a) } \int_0^1 \int_0^2 (x+2) \, dy \, dx$$

$$\text{b) } \int_2^4 \int_1^3 xy^3 \, dx \, dy$$

$$\text{c) } \int_{-\pi}^{\pi} \int_{-e}^e dr \, d\theta$$

$$\text{d) } \int_0^3 \int_0^1 y\sqrt{x+y^2} \, dy \, dx$$

$$\text{e) } \int_1^2 \int_0^2 \frac{x}{(1+xy)^2} \, dy \, dx$$

$$\text{f) } \int_0^{\ln 2} \int_0^1 xye^{x^2y} \, dx \, dy$$

$$\text{g) } \int_{-\pi/4}^{\pi/4} \int_0^{\pi/4} \cos(x+y) \, dx \, dy$$

$$\text{h) } \int_1^e \int_0^{\pi/2} \frac{\sin y}{x} \, dy \, dx$$

$$\text{i) } \int_0^1 \int_{x^2}^x xy^3 \, dy \, dx$$

$$\text{j) } \int_1^2 \int_y^{3-y} y \, dx \, dy$$

$$\text{k) } \int_{-2}^2 \int_0^{\sqrt{1-y^2/4}} y \, dx \, dy$$

$$\text{l) } \int_{\sqrt{\pi}}^{\sqrt{2\pi}} \int_0^{x^3} \sin\left(\frac{y}{x}\right) \, dy \, dx$$

$$\text{m) } \int_{\pi/2}^{\pi} \int_0^{x^2} \frac{1}{x} \cos\left(\frac{y}{x}\right) \, dy \, dx$$

$$\text{n) } \int_0^{\pi/2} \int_0^{\sin y} e^x \cos y \, dx \, dy$$

$$\text{o) } \int_1^2 \int_0^{y^2} e^{x/y^2} \, dx \, dy$$

$$\text{p) } \int_0^3 \int_{-\sqrt{9-x^2}}^{\sqrt{9-x^2}} (x+y) \, dy \, dx$$

$$\text{q) } \int_0^1 \int_0^x y\sqrt{x^2-y^2} \, dy \, dx$$

Double Integrals over Rectangles

Recall: (Fubini's Theorem for Rectangles)

If $R = [a,b] \times [c,d] = \{ (x,y) : a \leq x \leq b, c \leq y \leq d \}$ then

$$\iint_R f(x,y) dA = \int_a^b \int_c^d f(x,y) dy dx = \int_c^d \int_a^b f(x,y) dx dy$$

Exercise 1: Find $\iint_R 3x^2y dA$ where R is the rectangle $[0,2] \times [0,4]$.

Solution: We choose $dA = dy dx$ (there is no specific reason !)

$$\begin{aligned} \iint_R 3x^2y dA &= \int_0^2 \int_0^4 3x^2y dy dx = \int_0^2 \dots dx \cdot \int_0^4 \dots dy \\ &= \left[\dots \right]_0^2 \cdot \left[\dots \right]_0^4 = (\dots - \dots) \cdot (\dots - \dots) = \underline{\dots} \end{aligned}$$

Exercise 2: Find $\iint_R (x \sin y - y \sin x) dA$ where R is the rectangle $\left[0, \frac{\pi}{2}\right] \times \left[0, \frac{\pi}{3}\right]$.

Solution: We choose $dA = dx dy$ (there is no specific reason !)

$$\begin{aligned} \iint_R (x \sin y - y \sin x) dA &= \int_0^{\frac{\pi}{2}} \int_0^{\frac{\pi}{3}} (x \sin y - y \sin x) dx dy \\ &= \int_0^{\frac{\pi}{2}} \left[\dots \right]_{x=0}^{x=\dots} dy \\ &= \int_0^{\frac{\pi}{2}} \left\{ (\dots) - (\dots) \right\} dy \end{aligned}$$

Exercise 1

$$= \int_0^{\dots} (\dots) dy = \left[\dots \right]_{y=0}^{\dots}$$

Solution

$$= \dots = \dots = \dots = \underline{\underline{\dots}}$$

Exercise 3: Find $I = \int_0^1 \int_0^{\sqrt{\pi}} y^3 \sin(xy^2) dy dx$.

Solution: The inner integral,

$$\int_0^{\sqrt{\pi}} y^3 \sin(xy^2) dy$$

is *very difficult* to evaluate ! We try to change the order of integration:

$$I = \int_0^1 \int_0^{\sqrt{\pi}} y^3 \sin(xy^2) dy dx = \int_0^{\sqrt{\pi}} \int_0^{\dots} y^3 \sin(xy^2) d \dots dy$$

Recall: $\int \sin kx dx = \dots$

$$= \int_0^{\sqrt{\pi}} \left[y^3 \dots \right]_{x=\dots}^{x=\dots} dy = \int_0^{\sqrt{\pi}} \left(\dots - \dots \right) dy$$

$$= \int_0^{\sqrt{\pi}} \left(\dots - \dots \right) dy = \left[\dots - \dots \right]_0^{\dots}$$

$$= \left(\dots \right) - \left(\dots \right) = \underline{\underline{\dots}}$$

Exercise 4: Find the volume of the solid which lies above the rectangle $[0,1] \times [0,3]$ in the xy -plane, and below the plane $2x + y + 2z = 6$.

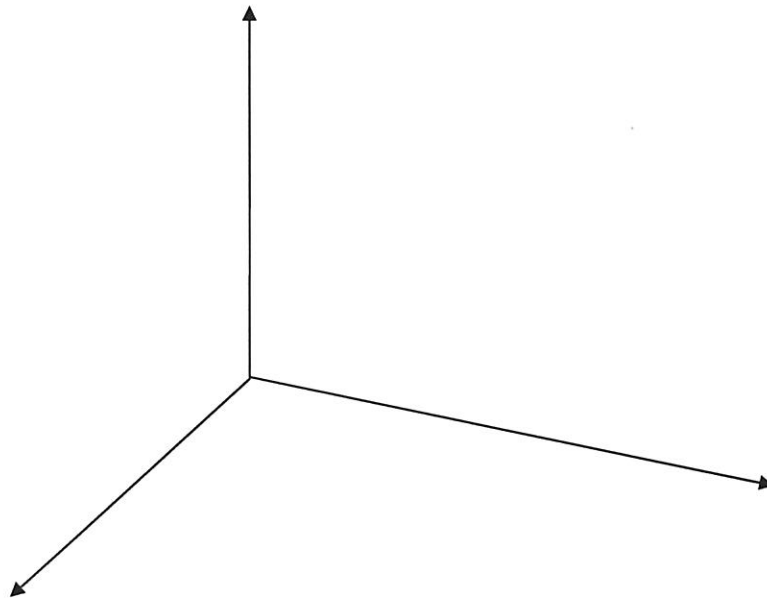
Solution: First sketch the solid: Find the intercepts with the coordinate axis.

x -intercept: set $y = z = 0$: = $\Rightarrow x = \dots$

y -intercept: set = = 0 : = $\Rightarrow y = \dots$

z -intercept: set = = 0 : = $\Rightarrow z = \dots$

Now sketch the plane, and the solid.



The volume is

$$\begin{aligned}
 V &= \iint_R z \, dA = \int_{\dots}^{\dots} \int_{\dots}^{\dots} (\dots) \, dy \, dx \\
 &= \int_{\dots}^{\dots} \left[\dots \right]_{y=\dots}^{y=\dots} dx \\
 &= \int_{\dots}^{\dots} \left(\left[\dots \right] - \left[\dots \right] \right) dx = \int_{\dots}^{\dots} (\dots) dx \\
 &= \left[\dots \right]_{\dots}^{\dots} = (\dots) - (\dots) = \underline{\underline{\dots}}
 \end{aligned}$$

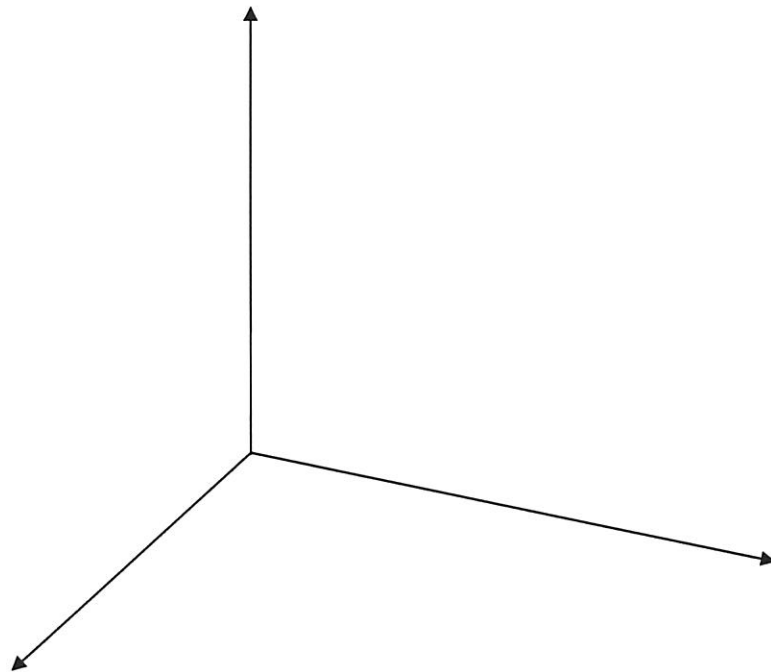
Exercise 5: Find the volume of the solid which lies above the rectangle

$$R = \{ (x, y) : 0 \leq x \leq 2, 0 \leq y \leq 3 \}$$

in the xy -plane, and below the surface $z = 9 - x^2$.

Solution: First sketch the solid:

The surface $z = 9 - x^2$ is a



The volume is

$$\begin{aligned}
 V &= \iint_R z \, dA = \int_{\dots}^{\dots} \int_{\dots}^{\dots} (\dots) \, dx \, dy \\
 &= \int_0^{\dots} \dots \, dx \cdot \int_0^{\dots} \dots \, dy \\
 &= \left[\dots \right]_0^{\dots} \cdot (\dots) \\
 &= \dots \cdot \dots = \dots = \underline{\underline{\dots}}
 \end{aligned}$$

Additional Exercises:

1) Find $\iint_R f(x, y) dA$ where R is as given

a) $\iint_R 4x^3 y dA, \quad R = [-1, 2] \times [-2, 2]$

b) $\iint_R x\sqrt{1-x^2} dA, \quad R = [0, 1] \times [-2, 3]$

c) $\iint_R (y + 2x) dA, \quad R = [-1, 2] \times [-1, 4]$

d) $\iint_R (12xy^2 - 8x^3) dA, \quad R = [1, 2] \times [-1, 2]$

2) Find the volume of the solid which lies above the rectangle R in the xy -plane, and below the given surface $z = f(x, y)$.

a) $R = [0, 2] \times [0, 2], \quad z = 8 - x - 2y$

b) $R = [1, 3] \times [0, 2], \quad z = 3x^3 - 3x^2y$

c) $R = [1, 2] \times [1, 2], \quad z = \frac{1}{(x+y)^2}$

3) Evaluate the iterated integrals by changing the order of integration.

a) $\iint_R 4x^3 y dA, \quad R = [-1, 2] \times [-2, 2]$

b) $R = [0, 1] \times [-2, 3]$

Double Integrals over Arbitrary Regions

Recall:


Type I Region



$$a \leq x \leq b$$

$$g(x) \leq y \leq h(x)$$

Type II Region



$$c \leq y \leq d$$

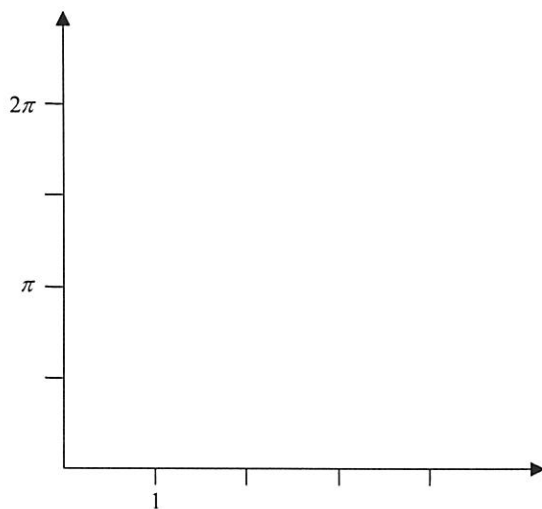
$$g(y) \leq x \leq h(y)$$

$$\iint_R f(x,y) dA = \int_a^b \int_{g(x)}^{h(x)} f(x,y) dy dx$$

$$\iint_R f(x,y) dA = \int_c^d \int_{g(y)}^{h(y)} f(x,y) dx dy$$

Exercise 1: Find $\iint_R x \cos(xy) dA$ where R is the region bounded by $x=1$, $x=2$, $y=\frac{2\pi}{x}$ and $y=\frac{\pi}{2}$.

Solution: First sketch the region R .



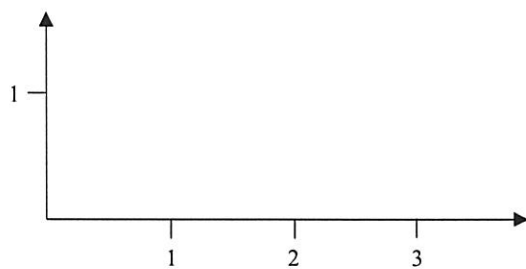
Type

$$\left\{ \begin{array}{l} \dots \leq x \leq \dots \\ \dots \leq y \leq \dots \end{array} \right.$$

$$\begin{aligned}
 \iint_R x \cos(xy) \, dA &= \int_{\dots}^{\dots} \int_{\dots}^{\dots} x \cos(xy) \, dy \, dx = \int_{\dots}^{\dots} \left[x \frac{\sin(xy)}{x} \right]_{y=\dots}^{y=\dots} dx \\
 &= \int_{\dots}^{\dots} (\dots) dx = \int_{\dots}^{\dots} (\dots) dx \\
 &= \left[\dots \right]_{\dots}^{\dots} = \dots = \underline{\underline{\dots}}
 \end{aligned}$$

Exercise 2: Find $\iint_R 2xy \, dA$ where R is the parallelogram with vertices $(0,0)$, $(1,1)$, $(2,0)$ and $(3,1)$.

Solution: Sketch the region R .



Type

$$\left\{ \begin{array}{l} \dots \leq \dots \leq \dots \\ \dots \leq \dots \leq \dots \end{array} \right.$$

The lines on the left and right have equations:

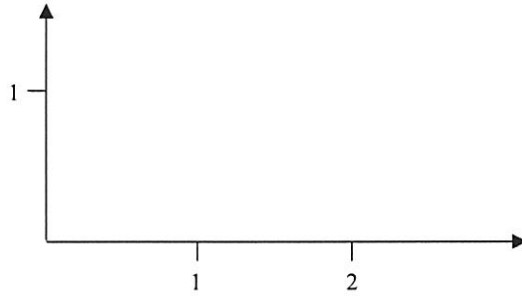
$$y = \dots \Rightarrow x = \dots$$

$$y = \dots \Rightarrow x = \dots$$

$$\begin{aligned}
 \iint_R 2xy \, dA &= \int_{\dots}^{\dots} \int_{\dots}^{\dots} 2xy \, d\dots \, d\dots = \int_{\dots}^{\dots} \left[\dots \right]_{x=\dots}^{x=\dots} d\dots \\
 &= \int_{\dots}^{\dots} (\dots) d\dots = \int_{\dots}^{\dots} (\dots) d\dots \\
 &= \int_{\dots}^{\dots} (\dots) d\dots = \left[\dots \right]_{\dots}^{\dots} = \dots = \underline{\underline{\dots}}
 \end{aligned}$$

Exercise 3: Find $\iint_R \cos(y^2) dA$ where R is the triangle with vertices $(0,0)$, $(0,1)$ and $(2,1)$.

Solution: First sketch the region R .



The region R is type

Which one to choose? Compare the two iterated integrals:

$$\underbrace{\iint \cos(y^2) dy dx}_{\dots\dots\dots} \quad \text{and} \quad \underbrace{\iint \cos(y^2) dx dy}_{\dots\dots\dots}$$

We choose type : $\left\{ \begin{array}{l} \dots\dots\dots \leq \dots\dots\dots \leq \dots\dots\dots \\ \dots\dots\dots \leq \dots\dots\dots \leq \dots\dots\dots \end{array} \right.$

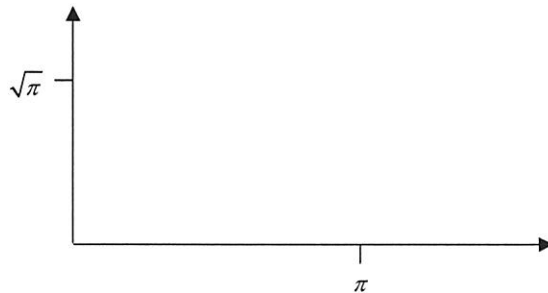
$$\begin{aligned} \iint_R \cos(y^2) dA &= \int_0^{\dots\dots\dots} \int_0^{\dots\dots\dots} \cos(y^2) dx dy = \int_0^{\dots\dots\dots} \left[\cos(y^2) \dots\dots\dots \right]_{x=0}^{x=\dots\dots\dots} dy \\ &= \int_0^{\dots\dots\dots} (\dots\dots\dots) dy = \int_0^{\dots\dots\dots} (\dots\dots\dots) d(\dots\dots\dots) \\ &= \left[\dots\dots\dots \right]_0^{\dots\dots\dots} = \dots\dots\dots = \underline{\underline{\dots\dots\dots}} \end{aligned}$$

Exercise 4: Find $\int_0^{\pi} \int_{\sqrt{x}}^{\sqrt{\pi}} \frac{\sin(y^2)}{y} dy dx$.

Solution: We can not integrate on the inside: $\int \frac{\sin(y^2)}{y} dy = ??$

Try to change the order of integration:

The given region is $\left\{ \begin{array}{l} \dots \leq \dots \leq \dots \\ \dots \leq \dots \leq \dots \end{array} \right.$ (type)



Change to type : $\left\{ \begin{array}{l} \dots \leq \dots \leq \dots \\ \dots \leq \dots \leq \dots \end{array} \right.$

$$\begin{aligned} \int_0^{\pi} \int_{\sqrt{x}}^{\sqrt{\pi}} \frac{\sin(y^2)}{y} dy dx &= \int_{\dots}^{\dots} \int_{\dots}^{\dots} \frac{\sin(y^2)}{y} dx dy = \int_{\dots}^{\dots} \frac{\sin(y^2)}{y} [\dots]_{x=\dots}^{x=\dots} dy \\ &= \int_{\dots}^{\dots} \frac{\sin(y^2)}{y} (\dots) dy = \int_{\dots}^{\dots} (\dots) d(y^2) \\ &= [\dots]_0^{\dots} = \dots = \dots = \underline{\dots} \end{aligned}$$

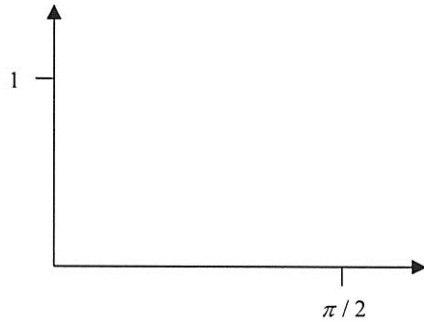
Exercise 5: Find $\int_0^1 \int_{\sin^{-1}y}^{\pi/2} \sec^2(\cos x) dx dy$.

Solution: We can not integrate on the inside: $\int \sec^2(\cos x) dx = ??$

Try to change the order of integration:

The given region is $\left\{ \begin{array}{l} \dots \leq \dots \leq \dots \\ \dots \leq \dots \leq \dots \end{array} \right.$ (type

Note: $x = \sin^{-1}y \Leftrightarrow y = \dots$



Change to type

$\left\{ \begin{array}{l} \dots \leq \dots \leq \dots \\ \dots \leq \dots \leq \dots \end{array} \right.$

$$\int_0^1 \int_{\sin^{-1}y}^{\pi/2} \sec^2(\cos x) dx dy = \int_{\dots}^{\dots} \int_{\dots}^{\dots} \sec^2(\cos x) dy dx$$

$$= \int_{\dots}^{\dots} \sec^2(\cos x) \left[\dots \right]_{y=\dots}^{y=\dots} dy$$

$$= \int_{\dots}^{\dots} \sec^2(\cos x) (\dots) dy \quad \left\{ \begin{array}{l} u = \dots \\ du = \dots \end{array} \right.$$

$$= \int_{\dots}^{\dots} \dots du = \left[\dots \right]_{\dots}^{\dots} = \dots = \underline{\underline{\dots}}$$

Exercise 6: Find the *area* of the region R bounded by the curves

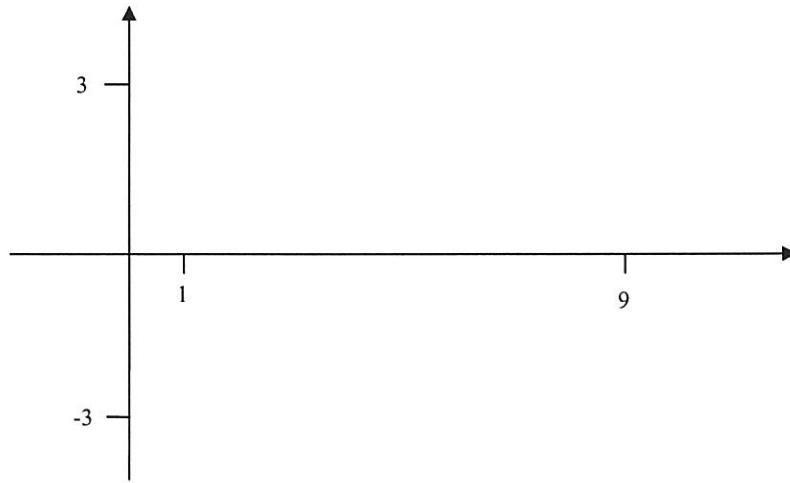
$$y^2 = 9 - x \quad \text{and} \quad y^2 = 9 - 9x.$$

Solution: Sketch the graphs:

$$y^2 = 9 - x \Rightarrow x = \dots\dots\dots \quad (\text{the graph is a } \dots\dots\dots)$$

$$y^2 = 9 - 9x \Rightarrow x = \dots\dots\dots \quad (\text{the graph is a } \dots\dots\dots)$$

(Think of y as the independent variable)



This is a type $\dots\dots\dots$ region: $\left\{ \begin{array}{l} \dots\dots\dots \leq \dots\dots\dots \leq \dots\dots\dots \\ \dots\dots\dots \leq \dots\dots\dots \leq \dots\dots\dots \end{array} \right.$

The area is

$$A = \iint_R dA = \dots\dots \int \int dx dy = \dots\dots \int \left[\dots\dots \right]_{x=\dots\dots}^{x=\dots\dots} dy$$

By symmetry

$$= \dots\dots \int \left(\dots\dots\dots \right) dy = \dots\dots \int \left(\dots\dots\dots \right) dy$$

$$= \dots\dots \left[\dots\dots\dots \right]_{\dots\dots}^{\dots\dots} = \dots\dots\dots$$

$$= \dots\dots\dots = \dots\dots\dots = \underline{\underline{\dots\dots\dots}}$$

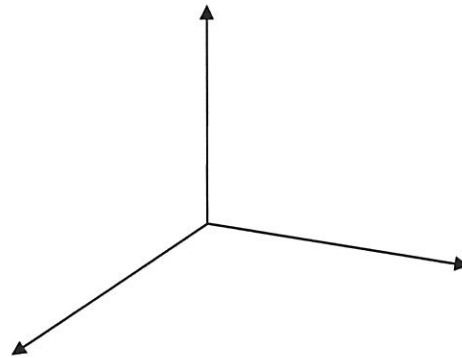
Exercise 7: Find the *volume* of the solid D which is bounded by the surfaces

$x+z=1, y=0, z=0$ and $y^2 = x$.

Solution: Sketch the surfaces:

$x+z=1$: the graph is a parallel to

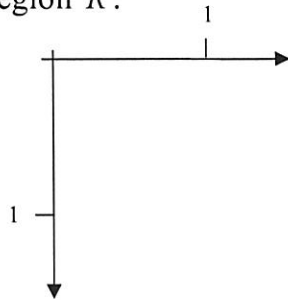
$y^2 = x$: the graph is a parallel to



$z_{upper} = \dots\dots\dots$

$z_{lower} = \dots\dots\dots$

Sketch the region R :



This is a type region:

$$\left\{ \begin{array}{l} \dots\dots\dots \leq \dots\dots\dots \leq \dots\dots\dots \\ \dots\dots\dots \leq \dots\dots\dots \leq \dots\dots\dots \end{array} \right.$$

The volume is

$$\begin{aligned} V &= \iint_R [z_{upper} - z_{lower}] dA = \iint_R [\dots\dots\dots] dA \\ &= \int \int (\dots\dots\dots) dy dx = \int (\dots\dots\dots) \left[\dots\dots\dots \right]_{y=\dots\dots\dots}^{y=\dots\dots\dots} dx \\ &= \int (\dots\dots\dots) \dots\dots\dots dx = \int (\dots\dots\dots) dx \\ &= \left[\dots\dots\dots \right]_{\dots\dots\dots}^{\dots\dots\dots} = \dots\dots\dots = \underline{\underline{\dots\dots\dots}} \end{aligned}$$

Additional Exercises:

1) Find the following integrals; the region R is bounded by the given curves.

a) $\iint_R xy \, dA$, R is bounded by $y = 0$, $x = 2$ and $y = x^2$.

b) $\iint_R x \cos(xy) \, dA$, R is bounded by $x = 1$, $x = 2$, $y = \frac{\pi}{2}$ and $y = x^2$.

c) $\iint_R (x + y) \, dA$, R is bounded by $y = x^2$ and $y = \sqrt{x}$.

d) $\iint_R (x - 1) \, dA$, R is bounded by $y = x$ and $y = x^3$.

e) $\iint_R x \cos(y) \, dA$, R is bounded by $y = 0$, $y = \pi$ and $y = x$.

f) $\iint_R (3x - 2y) \, dA$, R is bounded by the circle $x^2 + y^2 = 1$.

2) Evaluate each integral by exchanging the order of integration.

a) $\int_0^1 \int_{4x}^4 e^{-y^2} \, dy \, dx$

d) $\int_1^3 \int_0^{\ln x} x \, dy \, dx$

b) $\int_0^2 \int_{y/2}^1 \cos(x^2) \, dx \, dy$

e) $\int_0^1 \int_0^{\cos^{-1} x} x \, dy \, dx$

c) $\int_0^4 \int_{\sqrt{y}}^2 e^{x^3} \, dx \, dy$

f) $\int_0^1 \int_{\sin^{-1} y}^{\pi/2} \sec^2(\cos x) \, dx \, dy$

3) Sketch the region R bounded by the graphs of the equations, and find its area using double integrals.

a) $y = 1/x^2$, $y = -x^2$, $x = 1$, $x = 2$

b) $y = -x$, $x - y = 4$, $y = -1$, $y = 2$

c) $y = x$, $y = 3x$, $x + y = 4$

d) $y = e^x$, $y = \sin x$, $x = -\pi$, $x = \pi$

e) $y^2 = -x$, $3y - x = 4$

4) Find the volume of the solid that lies under the graph of $z = f(x, y)$ and above the region R in the xy -plane.

- a) $z = x^2 + 3y^2$, R is bounded by the curves $y = x^2$ and $y = 1$.
- b) $z = 9 - x^2$, R is in the first quadrant bounded by the curve $y^2 = 3x$.
- c) $z = 4x^2 + y^2$, R is the polygon with vertices $(0,0)$, $(0,1)$, $(2,0)$, $(2,1)$.
- d) $z = x^2 + 4y^2$, R is the polygon with vertices $(0,0)$, $(1,0)$, $(1,2)$.
- e) $z = y + 3$, R is enclosed by the ellipse $4x^2 + y^2 = 9$.

5) Sketch the solid in the first octant bounded by the graphs of the equations, and find its volume.

- a) $x^2 + z^2 = 9$, $y = 2x$, $y = 0$, $z = 0$
- b) $z = 4 - x^2$, $x + y = 2$, $x = 0$, $y = 0$, $z = 0$
- c) $2x + y + z = 4$, $x = 0$, $y = 0$, $z = 0$
- d) $y^2 = z$, $y = x$, $x = 4$, $z = 0$
- e) $z = x^2 + y^2$, $y = 4 - x^2$, $x = 0$, $y = 0$, $z = 0$
- f) $x^2 + y^2 = 16$, $x = z$, $y = 0$, $z = 0$

Double Integrals in Polar Coordinates

Recall: If the region R is described in polar coordinates by

$$a \leq \theta \leq b$$

$$g(\theta) \leq r \leq h(\theta)$$

then

$$\iint_R f(x,y) dA = \int_a^b \int_{g(\theta)}^{h(\theta)} f(r \cos \theta, r \sin \theta) r dr d\theta$$

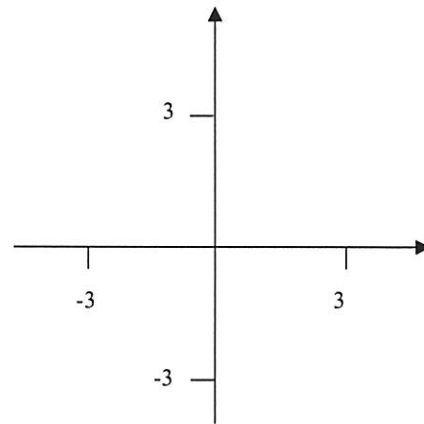
Exercise 1: Find $\iint_R xy^2 dA$ where R is the region bounded *to the right* by the circle $x^2 + y^2 = 9$, and *to the right* by the y -axis.

Solution: Sketch the region R :

Why should we use polar coordinates ?

.....

$$R : \begin{cases} \dots \leq \theta \leq \dots \\ \dots \leq r \leq \dots \end{cases}$$



$$\iint_R xy^2 dA = \int \int (r \cos \theta)(r \dots) \dots$$

$$= \int \dots \cos \theta d\theta \cdot \int \dots dr = \int \dots du \cdot \int \dots dr$$

$$u = \dots \quad du = \dots$$

$$= [\dots] \cdot [\dots] = \dots = \underline{\underline{\dots}}$$

Exercise 2: Find $\iint_R \frac{1}{\sqrt{x^2 + y^2}} dA$ where R is the triangle with vertices $(0,0)$, $(1,0)$ and $(1,1)$.

Solution: Sketch the region R :

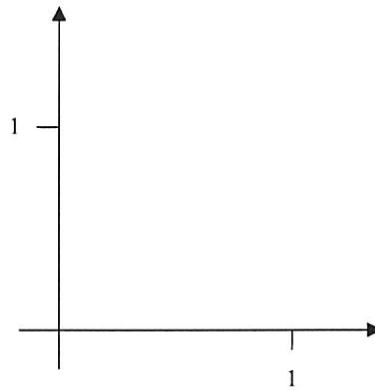
Why should we use polar coordinates ?

.....

Change to polar coordinates:

$$x=1 \Rightarrow \dots = 1$$

$$\Rightarrow r = \dots$$



$$R : \begin{cases} \dots \leq \theta \leq \dots \\ \dots \leq r \leq \dots \end{cases}$$

$$\iint_R \frac{1}{\sqrt{x^2 + y^2}} dA = \int \int \frac{1}{\dots} \underbrace{\dots}_{dA} = \int \int \dots$$

$$= \int \left[\dots \right]_{r=\dots}^{r=\dots} d\theta = \int \dots d\theta$$

$$= \left[\dots \right]_{\dots}^{\dots}$$

$$= \dots - \dots = \underline{\underline{\dots}}$$

Exercise 3

Exercise 3: Find $\int_0^2 \int_{-\sqrt{4-y^2}}^{\sqrt{4-y^2}} \frac{1}{2+x^2+y^2} dx dy$.

Solution: Why should we use polar coordinates ?

1.

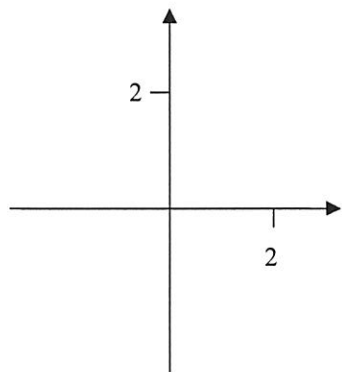
2.

Sketch the region R :

$R : \left\{ \begin{array}{l} \dots \leq y \leq \dots \\ \dots \leq x \leq \dots \end{array} \right.$ (type)

In polar coordinates:

$R : \left\{ \begin{array}{l} \dots \leq \theta \leq \dots \\ \dots \leq r \leq \dots \end{array} \right.$



$dA = \dots$

$$\int_0^2 \int_{-\sqrt{4-y^2}}^{\sqrt{4-y^2}} \frac{1}{2+x^2+y^2} \underbrace{dx dy}_{dA} = \int_{\dots}^{\dots} \int_{\dots}^{\dots} \frac{1}{2+\dots} \underbrace{\dots}_{dA}$$

$$= \int_0^{\dots} d\theta \cdot \int_0^{\dots} \frac{2r}{\dots} dr \quad \boxed{\int \frac{f'}{f} = \dots}$$

$$= \left[\dots \right]_0^{\dots} \cdot \left[\frac{1}{2} \dots \right]_0^{\dots}$$

$$= \dots = \underline{\underline{\dots}}$$

Exercise 4: Find $\iint_R x^2 y \, dA$ where R is the region enclosed *above* by

Solution: the circle $x^2 - 4x + y^2 = 0$ and *below* by the line $y = x$.

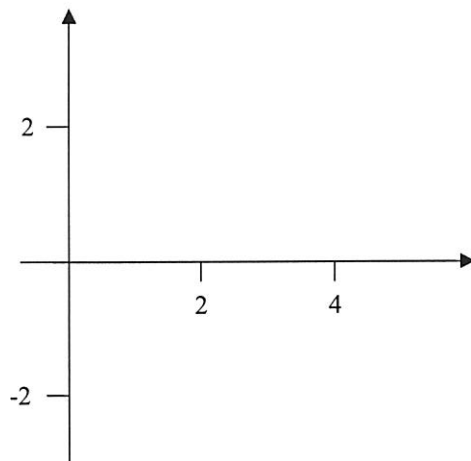
Solution: Sketch the circle and the line.

$$x^2 - 4x + y^2 = 0$$

$$\Rightarrow x^2 - 4x + \dots + y^2 = \dots$$

$$\Rightarrow (x - \dots)^2 + y^2 = \dots$$

circle, center \dots radius \dots



In polar coordinates:

$$y = x \Rightarrow \theta = \dots$$

$$x^2 - 4x + y^2 = 0$$

$$\Rightarrow r^2 - 4 \dots = 0$$

$$\Rightarrow r \dots = 0$$

Thus, $R : \begin{cases} \dots \leq \theta \leq \dots \\ \dots \leq r \leq \dots \end{cases}$

$$\iint_R x^2 y \, dA = \int \int (\dots)^2 (\dots) \underbrace{\dots}_{dA}$$

$$= \int \int \dots \, dr \, d\theta$$

$$= \int \dots \left[\dots \right]_{r=\dots}^{r=\dots} d\theta = \int \dots \, d\theta$$

$$= \int \frac{4^5}{5} \dots \, du = \left[\frac{4^5}{5} \dots \right]_{\dots}^{\dots} = \frac{4^5}{5} \cdot \frac{1}{\dots}$$

$u = \dots \quad du = \dots$

 $= \dots = \underline{\underline{\dots}}$

Note: This integral can also be done in Cartesian coordinates ! Try.

Exercise 5: Find the *volume* of the solid which is bounded by the cylinder $x^2 + y^2 = 4$, the plane $y + z = 4$ and the plane $z = 0$.

Solution: Sketch the solid.

$$z_{upper} = \dots\dots\dots$$

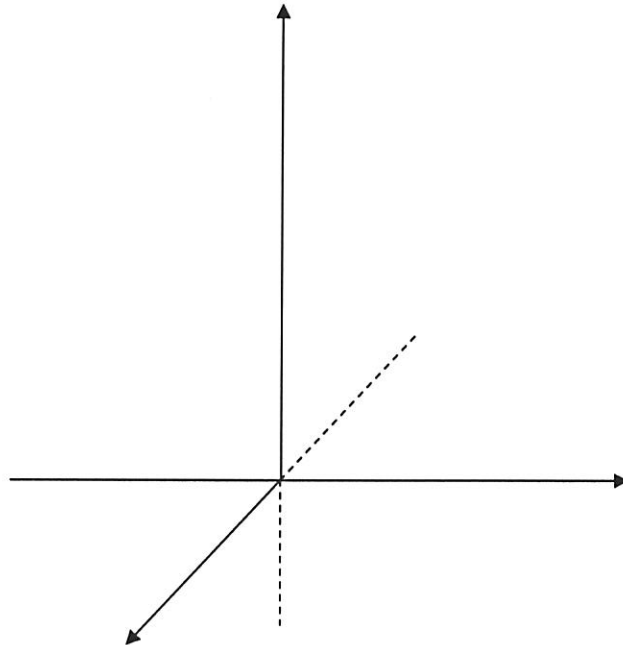
$$z_{lower} = \dots\dots\dots$$

In polar coordinates,

$$z_{upper} = \dots\dots\dots$$

$$z_{lower} = \dots\dots\dots$$

$$R : \begin{cases} \dots\dots\dots \leq \theta \leq \dots\dots\dots \\ \dots\dots\dots \leq r \leq \dots\dots\dots \end{cases}$$



The volume is

$$\begin{aligned} V &= \iint_R [z_{upper} - z_{lower}] dA = \iint_R [\dots\dots\dots - \dots\dots\dots] dA \\ &= \int_{\dots\dots\dots}^{\dots\dots\dots} \int_{\dots\dots\dots}^{\dots\dots\dots} (\dots\dots\dots) \underbrace{\dots\dots\dots}_{dA} = \int_{\dots\dots\dots}^{\dots\dots\dots} \int_{\dots\dots\dots}^{\dots\dots\dots} (\dots\dots\dots) dr d\theta \\ &= \int_{\dots\dots\dots}^{\dots\dots\dots} \left[\dots\dots\dots \right]_{r=\dots\dots\dots}^{r=\dots\dots\dots} d\theta \\ &= \int_{\dots\dots\dots}^{\dots\dots\dots} \left(\dots\dots\dots \right) d\theta = \left[\dots\dots\dots \right]_{\dots\dots\dots}^{\dots\dots\dots} \\ &= \dots\dots\dots = \underline{\underline{\dots\dots\dots}} \end{aligned}$$

Note: the *average height* of the solid is $h = 4$. A cylinder of this height has volume

$$V = \pi r^2 h = \pi \cdot 2^2 \cdot 4 = 16\pi!$$

Additional Exercises:

1) Use polar coordinates to evaluate the integral.

- a) $\iint_R (x^2 + y^2)^{3/2} dA$ R is bounded by the circle $x^2 + y^2 = 4$.
- b) $\iint_R \frac{x^2}{x^2 + y^2} dA$ R is bounded by the circles $x^2 + y^2 = a^2$
and $x^2 + y^2 = b^2$ with $0 < a < b$.
- c) $\iint_R \sqrt{x^2 + y^2} dA$ R is bounded by the triangle with vertices
(0,0), (3,0) and (3,3).
- d) $\iint_R \sqrt{x^2 + y^2} dA$ R is bounded by the semicircle
 $y = \sqrt{2x - x^2}$ and the line $y = x$.
- e) $\iint_R x^2(x^2 + y^2)^3 dA$ R is bounded by the semicircle $y = \sqrt{1 - x^2}$
and the x -axis.

2) Use polar coordinates to evaluate the integral.

- a) $\int_{-2}^2 \int_0^{\sqrt{4-x^2}} e^{-(x^2+y^2)} dy dx$
- b) $\int_0^3 \int_{-\sqrt{9-y^2}}^{\sqrt{9-y^2}} (x^2 + y^2)^{3/2} dx dy$
- c) $\int_0^4 \int_0^{\sqrt{16-x^2}} \cos(x^2 + y^2) dy dx$
- d) $\int_0^1 \int_0^{\sqrt{1-x^2}} e^{\sqrt{x^2+y^2}} dy dx$
- e) $\int_0^{\sqrt{2}} \int_y^{\sqrt{4-y^2}} \frac{1}{\sqrt{1+x^2+y^2}} dx dy$
- f) $\int_0^2 \int_0^{\sqrt{2x-x^2}} \sqrt{x^2 + y^2} dy dx$
- g) $\int_1^2 \int_0^x \frac{1}{\sqrt{x^2 + y^2}} dy dx$
- h) $\int_0^1 \int_y^{\sqrt{y}} \sqrt{x^2 + y^2} dx dy$

3) Find the volume of the given solid D .

- a) D is inside the sphere $x^2 + y^2 + z^2 = 25$ and outside the cylinder $x^2 + y^2 = 9$.
- b) D is bounded by the cone $z = \sqrt{x^2 + y^2}$ and the cylinder $x^2 + y^2 = 2x$.
- c) D is inside the paraboloid $z = 9 - x^2 + y^2$ and above the plane $z = 5$.
- d) D is inside the sphere $x^2 + y^2 + z^2 = 16$ and inside the cylinder $x^2 + y^2 = 4y$.

Triple Integrals

Recall: If the solid D can be described as

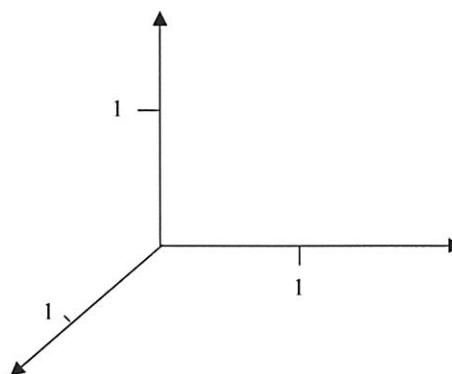
$$D = \left\{ (x, y, z) : (x, y) \in R, z_{lower} \leq z \leq z_{upper} \right\}$$

then

$$\iiint_D f(x, y, z) dV = \iint_R \int_{z_{lower}}^{z_{upper}} f(x, y, z) dz dA$$

Exercise 1: Find $\iiint_D (x - y) dV$ where D is the *tetrahedron* with vertices $(0, 0, 0)$, $(1, 0, 0)$, $(0, 1, 0)$ and $(0, 0, 1)$.

Solution: Sketch the tetrahedron.



Find the equation of the *upper* plane:

The equation of a plane is: $ax + \dots = d$

Substitute $(x, y, z) = (1, 0, 0)$: $\dots = d \Rightarrow a = \dots$

Substitute $(x, y, z) = (0, 1, 0)$: $\dots = d \Rightarrow b = \dots$

Substitute $(x, y, z) = \dots$: $\dots = d \Rightarrow c = \dots$

We can choose d freely. Choose $d = \dots \Rightarrow a = \dots, b = \dots, c = \dots$

The equation of the plane is $\dots = \dots$

or $z_{upper} = \dots$

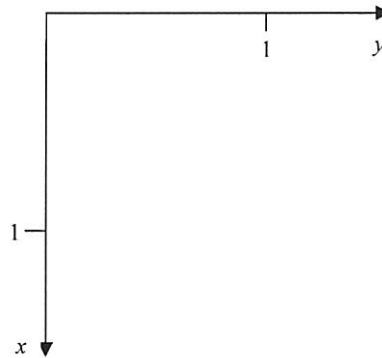
Also, $z_{lower} = \dots$

Now sketch the region R :

R is a

Consider as type I:

$$R : \begin{cases} \dots \leq x \leq \dots \\ \dots \leq y \leq \dots \end{cases}$$



$$\iiint_D (x-y) dV = \iint_R \int_{z_{lower}}^{z_{upper}} (x-y) dz dA = \int_0^1 \int_{\dots}^{\dots} \int_{\dots}^{\dots} (x-y) dz dy dx$$

$$= \int_0^1 \int_{\dots}^{\dots} \left[\dots \right]_{z=\dots}^{z=\dots} dy dx$$

$$= \int_0^1 \int_{\dots}^{\dots} \left[x(\dots) - y(\dots) \right] dx$$

$$= \int_0^1 \int_{\dots}^{\dots} (\dots) dy dx$$

$$= \int_0^1 \left[\dots \right]_{\dots}^{\dots} dx$$

$$= \int_0^1 (\dots) dx$$

$u = \dots \Rightarrow du = \dots$

$$= \int_{u=\dots}^{u=\dots} (\dots) du = \int_{\dots}^{\dots} (\dots) du$$

$$= \left[\dots \right]_{\dots}^{\dots} = \dots = \underline{\underline{\dots}}$$

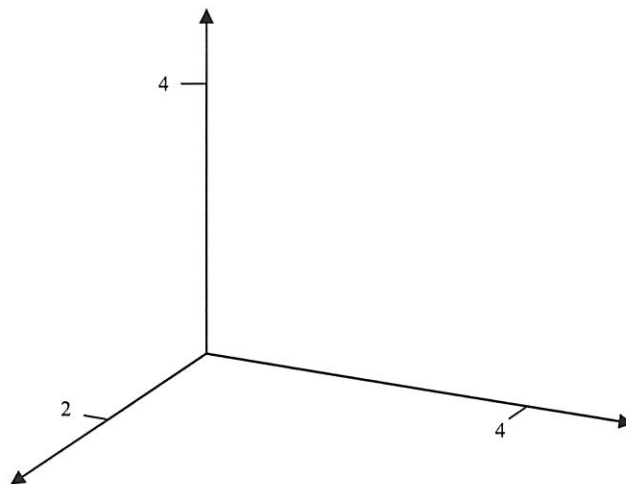
Exercise 2: Let D be the solid in the *first octant* bounded by the surfaces

$$z = 4 - x^2 \quad \text{and} \quad y = 4.$$

The *density* of the solid is $\delta(x, y, z) = 16 - xy$ (in g/m^3)

Find the *volume* and the *mass* of the solid D .

Solution: Sketch the solid.



$$z_{upper} = \dots\dots\dots$$

$$z_{lower} = \dots\dots\dots$$

$$R = \dots\dots\dots \left\{ \begin{array}{l} \dots\dots\dots \leq x \leq \dots\dots\dots \\ \dots\dots\dots \leq y \leq \dots\dots\dots \end{array} \right.$$

The volume is

$$\begin{aligned} V &= \iiint_D 1 \, dV = \iint_R \int_{z_{lower}}^{z_{upper}} 1 \, dz \, dA = \int_0^{\dots\dots\dots} \int_0^{\dots\dots\dots} \int_0^{\dots\dots\dots} 1 \, dz \, dy \, dx \\ &= \int_0^{\dots\dots\dots} \int_0^{\dots\dots\dots} \left[\dots \right]_{z=0}^{z=\dots\dots\dots} dy \, dx = \int_0^{\dots\dots\dots} \int_0^{\dots\dots\dots} (\dots\dots\dots) dy \, dx \\ &= \int_0^{\dots\dots\dots} (\dots\dots\dots) dx \cdot \int_0^{\dots\dots\dots} \dots\dots\dots dy = \left[\dots\dots\dots \right]_0^{\dots\dots\dots} \cdot \left[\dots \right]_0^{\dots\dots\dots} \\ &= (\dots\dots\dots) (\dots\dots\dots) = \dots\dots\dots = \underline{\underline{\dots\dots\dots}} \end{aligned}$$

The mass is

$$\begin{aligned}
 m &= \iiint_D \delta(x, y, z) dV = \iint_R \int_{z_{\text{lower}}}^{z_{\text{upper}}} (\dots\dots\dots) dz dA \\
 &= \int_0^{\dots\dots\dots} \int_0^{\dots\dots\dots} \int_0^{\dots\dots\dots} (\dots\dots\dots) dz dy dx \\
 &= \int_0^{\dots\dots\dots} \int_0^{\dots\dots\dots} [\dots\dots\dots]_{z=0}^{z=\dots\dots\dots} dy dx \\
 &= \int_0^{\dots\dots\dots} \int_0^{\dots\dots\dots} (\dots\dots\dots\dots\dots\dots\dots\dots\dots) dy dx \\
 &= \int_0^{\dots\dots\dots} \int_0^{\dots\dots\dots} (\dots\dots\dots\dots\dots\dots\dots\dots\dots) dy dx \\
 &= \int_0^{\dots\dots\dots} [\dots\dots\dots\dots\dots\dots\dots\dots\dots]_{y=0}^{y=\dots\dots\dots} dx \\
 &= \int_0^{\dots\dots\dots} (\dots\dots\dots\dots\dots\dots\dots\dots\dots) dx \\
 &= [\dots\dots\dots\dots\dots\dots\dots\dots\dots]_{\dots\dots\dots}^{\dots\dots\dots} \\
 &= \dots\dots\dots\dots\dots\dots\dots\dots\dots \\
 &= \dots\dots\dots\dots\dots\dots\dots\dots\dots = \dots\dots\dots\dots\dots\dots\dots\dots\dots = \underline{\underline{\dots\dots\dots\dots\dots\dots\dots\dots\dots}}
 \end{aligned}$$

Additional Exercises:

1) Evaluate the given integrals.

a) $\iiint_D xy \sin yz \, dV$ D is the cube
 $\{ (x, y, z) : 0 \leq x \leq \pi, 0 \leq y \leq 1, 0 \leq z \leq \pi/6 \}$.

b) $\iiint_D y \, dV$ D is the solid bounded by the planes
 $y = x, y = 0, z = 0$ and the surface $z = 1 - x^2$.

c) $\iiint_D x(y - z) \, dV$ D is the cube $[-1, 1] \times [0, 2] \times [0, 3]$.

d) $\iiint_D (x + y + z) \, dV$ D is the *tetrahedron* with vertices
 $(0, 0, 0), (1, 0, 0), (0, 1, 0)$ and $(0, 0, 1)$.

2) Find the volume of the given solid D using a triple integral.

a) D is in the first octant, and enclosed by the plane $3x + 6y + 4z = 12$.

b) D is in the first octant, and enclosed by the surfaces $y^2 + z^2 = 1$ and $y = x$.

c) D is enclosed by the surfaces $z = \sqrt{y}, x + y = 1, x = 0$ and $z = 0$.

d) D is enclosed by the surfaces $z = 4 - x^2, z = 4 - y, y = 0$ and $z = 0$.

e) D is enclosed by the surfaces $y^2 + z^2 = 1, x + y + z = 2$ and $x = 0$.

f) D is enclosed by the surfaces $z = e^{x+y}, y = 3x, x = 2, y = 0$ and $z = 0$.

g) D is enclosed by the cylinders $x^2 + y^2 = 1$ and $x^2 + z^2 = 1$.

3) Consider the solid D enclosed by the given surfaces, with density $\delta(x, y, z)$.

Find the mass of the solid.

a) $x + 2y + z = 4, x = 0, y = 0$ and $z = 0$, where $\delta(x, y, z) = x^2 + y^2$.

b) $x + 2y + z = 4, x = 0, y = 0$ and $z = 0$, where $\delta(x, y, z) = x^2 + y^2$.

Triple Integrals in Cylindrical Coordinates

Recall: If the solid D can be described as

$$D = \left\{ (r, \theta, z) : a \leq \theta \leq b, g(\theta) \leq r \leq h(\theta), z_{lower} \leq z \leq z_{upper} \right\}$$

then

$$\begin{aligned} \iiint_D f(x, y, z) dV &= \iint_R \int_{z_{lower}}^{z_{upper}} f(x, y, z) dz dA \\ &= \int_a^b \int_{g(\theta)}^{h(\theta)} \int_{z_{lower}}^{z_{upper}} f(r \cos \theta, r \sin \theta, z) \underbrace{r dz dr d\theta}_{dV} \end{aligned}$$

Exercise 1: Find the *average value* of $f(x, y, z) = \frac{1}{(z+1)^2}$ on the solid D which is bounded by the surfaces

$$z = 2 - x^2 - y^2 \quad \text{and} \quad z = \sqrt{x^2 + y^2}.$$

Solution:

Graph is a

Graph is a

We use cylindrical coordinates.

Upper surface is the

$\Rightarrow z_{upper} = \dots\dots\dots$

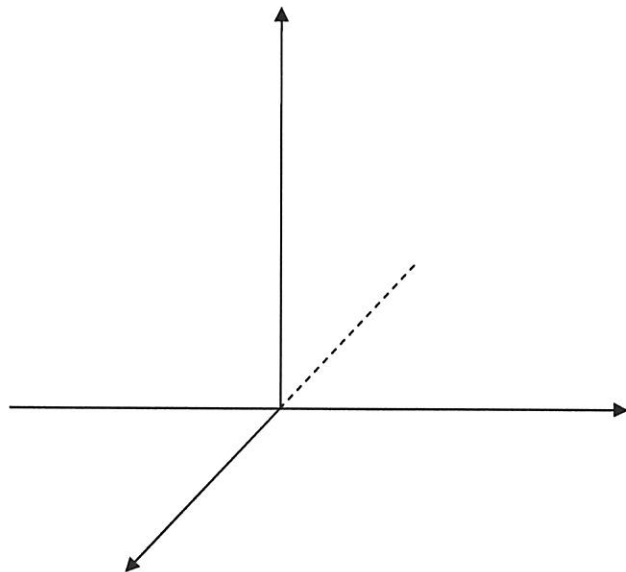
Lower surface is the

$\Rightarrow z_{lower} = \dots\dots\dots$

In cylindrical coordinates:

$z_{upper} = \dots\dots\dots$

$z_{lower} = \dots\dots\dots$



Find the circle of intersection of the two surfaces:

2. The volume

$$z_{\text{paraboloid}} = z_{\text{cone}}$$

$$\dots\dots\dots = r$$

$$\dots\dots\dots = 0$$

$$(\dots\dots\dots)(\dots\dots\dots) = 0$$

$$r = \dots\dots, \quad r = \dots\dots \Rightarrow r = \dots\dots$$

$$R : \begin{cases} \dots\dots \leq \theta \leq \dots\dots \\ \dots\dots \leq r \leq \dots\dots \end{cases}$$

1. The integral is

$$\iiint_D f(x, y, z) dV = \iint_R \int_{z_{\text{lower}}}^{z_{\text{upper}}} \frac{1}{(z+1)^2} dz dA$$

$$= \int_0^{\dots\dots} \int_0^{\dots\dots} \int_{\dots\dots}^{\dots\dots} \frac{1}{(z+1)^2} \underbrace{\dots\dots}_{dV} dr d\theta$$

$$= \int_0^{\dots\dots} \int_0^{\dots\dots} r \left[\frac{-1}{\dots\dots} \right]_{z=\dots\dots}^{z=\dots\dots} dr d\theta$$

$$= \int_0^{\dots\dots} \int_0^{\dots\dots} r \left(\dots\dots \right) dr d\theta$$

$$= \int_0^{\dots\dots} d\theta \cdot \int_0^{\dots\dots} \left\{ \dots\dots \right\} dr$$

$$= 2\pi \cdot \int_0^{\dots\dots} \left\{ \dots\dots \right\} dr$$

$$= 2\pi \cdot \left[\dots\dots \right]_0^{\dots\dots}$$

$$= 2\pi \cdot \left(\left[\dots\dots \right] - \left[\dots\dots \right] \right)$$

$$= 2\pi \cdot \left(\dots\dots \right) = \pi \cdot \left(\dots\dots \right)$$

2. The volume is

$$\begin{aligned}
 V &= \iiint_D 1 \, dV = \iint_R \int_{z_{\text{lower}}}^{z_{\text{upper}}} 1 \, dz \, dA = \int_0^{\dots} \int_0^{\dots} \int_{\dots}^{\dots} \underbrace{dr \, d\theta}_{dV} \\
 &= \int_0^{\dots} \int_0^{\dots} r \left[\dots \right]_{z=\dots}^{z=\dots} dr \, d\theta = \int_0^{\dots} d\theta \cdot \int_0^{\dots} (\dots) dr \\
 &= 2\pi \left[\dots \right]_0^{\dots} = 2\pi \left(\dots \right) = 2\pi \dots = \dots
 \end{aligned}$$

3. The average value is

$$f_{\text{avg}} = \frac{1}{V} \iiint_D f(x, y, z) \, dV = \frac{\dots}{\dots} \cdot \dots = \frac{\dots}{\dots}$$

Additional Exercises:

1) Sketch the graph of the equation in three dimensions.

- | | | |
|---------------|--------------------|-----------------------|
| a) $r = 4$ | c) $z = \sqrt{3}r$ | e) $\theta = \pi/4$ |
| b) $z = 4r^2$ | d) $z = 4 - r^2$ | f) $r = -\csc \theta$ |

2) Evaluate the given integrals.

- | | |
|---------------------------------------|---|
| a) $\iiint_D x^2 \, dV$ | D is in the first octant, and bounded by the sphere $x^2 + y^2 + z^2 = 9$. |
| b) $\iiint_D z^2 \, dV$ | D is bounded below by the cone $z = \sqrt{x^2 + y^2}$ and above by the sphere $x^2 + y^2 + z^2 = 8$. |
| c) $\iiint_D (x^2 + y^2 + z^2) \, dV$ | D is bounded by the cone $z = \sqrt{x^2 + y^2}$ and the plane $z = 2$. |
| d) $\iiint_D (x + y + z) \, dV$ | D is bounded by the cones $z = \sqrt{\frac{x^2 + y^2}{3}}$ and $z = \sqrt{3(x^2 + y^2)}$, and the cylinder $x^2 + y^2 = 9$. |

3) Find the volume of the solid D using a triple integral in cylindrical coordinates.

a) D is bounded by the paraboloid $z = x^2 + y^2$, the cylinder $x^2 + y^2 = 4$ and the xy -plane.

b) D is enclosed by the surfaces $z = \sqrt{x^2 + y^2}$, $x^2 + y^2 = 4$ and $z = 8 - x^2 - y^2$.

c) D is outside the cylinder $x^2 + y^2 = 4$ and inside the sphere $x^2 + y^2 + z^2 = 9$.

d) D is in the first octant, and inside the surfaces $x^2 + y^2 = 4x$ and $x^2 + y^2 + z^2 = 16$.

4) Change to an integral in cylindrical coordinates, and integrate.

a)
$$\int_0^1 \int_0^{\sqrt{1-x^2}} \int_0^{\sqrt{1-x^2-y^2}} z \, dz \, dy \, dx$$

b)
$$\int_0^4 \int_0^{\sqrt{4-x^2}} \int_0^{\sqrt{4-x^2-y^2}} xyz \, dz \, dy \, dx$$

c)
$$\int_{-3}^3 \int_{-\sqrt{9-y^2}}^{\sqrt{9-y^2}} \int_0^{\sqrt{9-x^2-y^2}} xy \, dz \, dx \, dy$$

d)
$$\int_0^3 \int_0^{\sqrt{9-x^2}} \int_{\sqrt{x^2+y^2}}^{\sqrt{18-x^2-y^2}} x^2 y z \, dz \, dy \, dx$$

e)
$$\int_{-2}^2 \int_0^{\sqrt{4-x^2}} \int_1^{5-x^2-y^2} x^2 y z \, dz \, dy \, dx$$

Triple Integrals in Spherical Coordinates

Recall: If the solid D can be described as

$$D = \{ (\rho, \phi, \theta) : a \leq \theta \leq b, \quad f_1(\theta) \leq \phi \leq f_2(\theta), \quad g_1(\phi, \theta) \leq \rho \leq g_2(\phi, \theta) \}$$

then

$$\iiint_D f(x, y, z) dV = \int_a^b \int_{f_1(\theta)}^{f_2(\theta)} \int_{g_1(\phi, \theta)}^{g_2(\phi, \theta)} f(\underbrace{\rho \sin \phi \cos \theta}_x, \underbrace{\rho \sin \phi \sin \theta}_y, \underbrace{\rho \cos \phi}_z) \underbrace{\rho^2 \sin \phi}_{dV} d\rho d\phi d\theta$$

Exercise 1: Find the spherical coordinates (ρ, ϕ, θ) of the point $P(x, y, z)$.
Then sketch the point showing the spherical coordinates.

a) $P(x, y, z) = (1, 0, 1)$.

Solution: We use

$$\rho = \sqrt{\dots + \dots + \dots} = \sqrt{\dots + \dots + \dots} = \sqrt{\dots} = \dots$$

$$z = \rho \cos \dots \Rightarrow \cos \phi = \frac{z}{\rho} = \frac{\dots}{\dots} = \dots$$

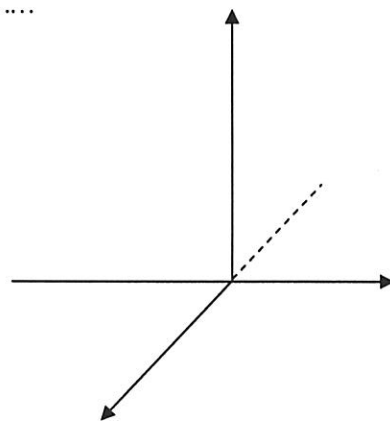
$$\Rightarrow \phi = \cos^{-1}\left(\frac{\dots}{\dots}\right) = \dots$$

$$\tan \theta = \frac{y}{x} = \frac{\dots}{\dots} = \dots \Rightarrow \theta = \dots \text{ or } \theta = \dots$$

Because $(x, y) = (\dots, \dots) \Rightarrow \theta = \dots$

Answer:

$(\rho, \phi, \theta) = (\dots, \dots, \dots)$



b) $P(x,y,z) = (-1, -1, \sqrt{2})$.

Solution: We use

$$\rho = \sqrt{\dots + \dots + \dots} = \sqrt{\dots + \dots + \dots} = \sqrt{\dots} = \dots$$

$$z = \rho \cos \phi \Rightarrow \cos \phi = \frac{z}{\rho} = \frac{\dots}{\dots} = \dots$$

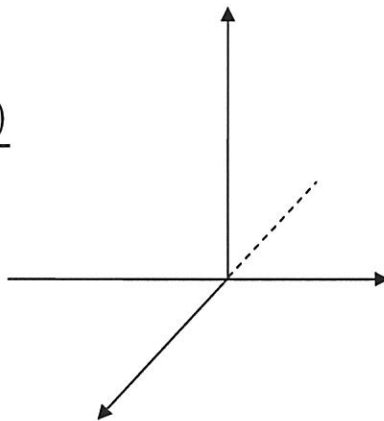
$$\Rightarrow \phi = \cos^{-1}\left(\frac{\dots}{\dots}\right) = \dots$$

$$\tan \theta = \frac{y}{x} = \frac{\dots}{\dots} = \dots \Rightarrow \theta = \dots \text{ or } \theta = \dots$$

Because $(x,y) = (\dots, \dots)$ (..... quadrant) $\Rightarrow \theta = \dots$

Answer:

$(\rho, \phi, \theta) = (\dots, \dots, \dots)$



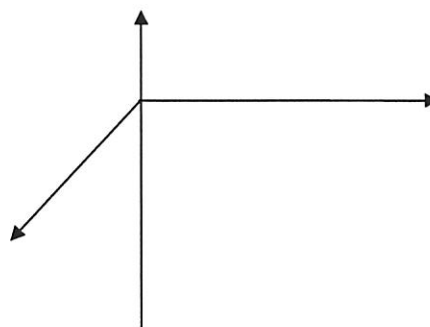
Exercise 2: If $(\rho, \phi, \theta) = \left(3, \frac{3\pi}{4}, \frac{\pi}{4}\right)$,
find (x, y, z) .

Solution: Recall that

$$x = r \cos \theta = \rho \dots \cos \theta$$

$$y = r \dots = \rho \dots$$

$$z = \rho \dots$$



Therefore,

$$x = \dots \cdot \sin \dots \cdot \cos \dots = \dots = \dots$$

$$y = \dots \cdot \sin \dots \cdot \sin \dots = \dots = \dots$$

$$z = \dots \cdot \cos \dots = \dots = \dots$$

Answer: $(x, y, z) = (\dots, \dots, \dots)$

Exercise 3: Change each equation to *spherical* coordinates.

a) $x^2 + y^2 + z^2 = 25.$

Solution: This is the equation of

$\rho^2 = x^2 + \dots$ gives $\rho^2 = \dots$

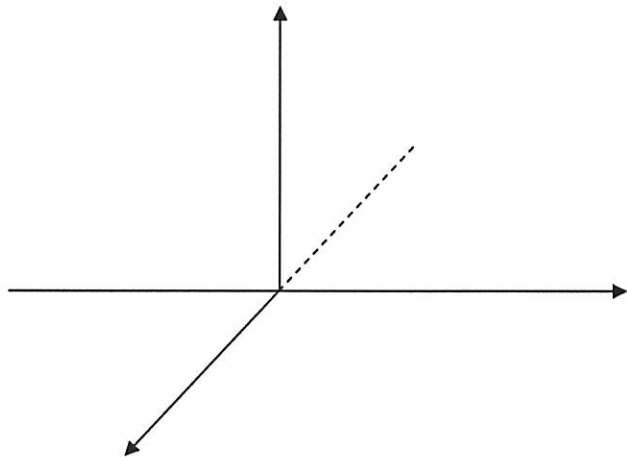
Answer: $\rho = \dots$

b) $z = \sqrt{\frac{x^2 + y^2}{3}}.$

Solution: This is the equation of

Write as

$z = \frac{1}{\dots} \sqrt{x^2 + y^2}$



By trigonometry,

$\cot \phi = \frac{z}{\dots} = \frac{1}{\dots} \Rightarrow \phi = \cot^{-1}\left(\frac{1}{\dots}\right) = \dots$

Answer: $\phi = \dots$

c) $z = 3.$

Solution: This is the equation of

$z = \rho \dots$ gives

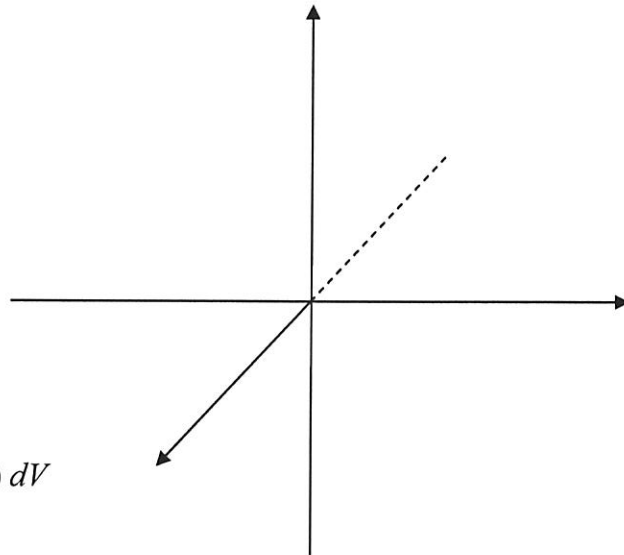
$3 = \rho \dots \Rightarrow \rho = \dots$

Answer: $\rho = \dots$

Exercise 4: The temperature T at a point (x, y, z) inside a sphere of radius 4 centered at the origin is $T(x, y, z) = 100 + \sqrt[4]{x^2 + y^2 + z^2}$ (in $^{\circ}\text{C}$). Find the *average temperature* T_{avg} inside the sphere.

Solution: Sketch the sphere.

$$D : \begin{cases} \dots \leq \theta \leq \dots \\ \dots \leq \phi \leq \dots \\ \dots \leq \rho \leq \dots \end{cases}$$



Recall:

$$T_{avg} = \frac{1}{\text{volume}(D)} \iiint_D T(x, y, z) dV$$

1. The volume of a sphere of radius $\rho = 4$ is

$$V = \text{volume}(D) = \frac{4}{3} \pi \rho^3 = \dots = \dots$$

2. The average temperature is

$$\begin{aligned} T_{avg} &= \frac{1}{V} \iiint_D \left(100 + \sqrt[4]{x^2 + y^2 + z^2} \right) dV \\ &= \frac{1}{V} \left\{ \iiint_D 100 dV + \iiint_D \dots dV \right\} \\ &= \frac{1}{V} \left\{ 100 \iiint_D dV + \int_0^{\dots} \int_0^{\dots} \int_0^{\dots} \underbrace{\dots}_{dV} d\theta \right\} \\ &= \frac{1}{V} \left\{ 100 \dots + \int_0^{\dots} d\theta \cdot \int_0^{\dots} \dots d\phi \cdot \int_0^{\dots} \dots d\rho \right\} \\ &= \dots + \frac{1}{V} \cdot \left[\dots \right]_0^{\dots} \cdot \left[\dots \right]_0^{\dots} \cdot \left[\dots \right]_0^{\dots} \end{aligned}$$

$$\begin{aligned}
 &= \dots + \frac{1}{V} \cdot [\dots] \cdot [\dots] \cdot [\dots] \\
 &= \dots + \frac{3}{\dots} \cdot \dots \cdot \dots = 100 + \frac{\dots}{\dots} = \underline{\underline{\dots}}
 \end{aligned}$$

Exercise 5: A solid D is bounded below by the plane $z = 1$, sideways by the cone $z = \sqrt{x^2 + y^2}$ and above by the sphere $x^2 + y^2 + z^2 = 8$.

The density of the solid is $\delta(x, y, z) = \frac{1}{z}$ (in g/cm^3)

Find the mass of the solid D .

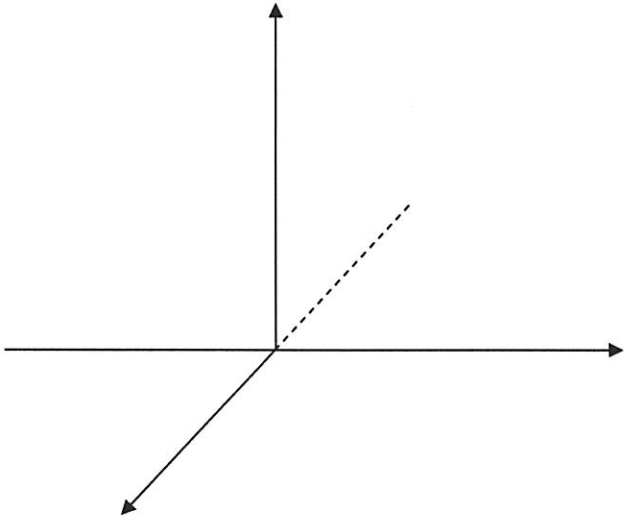
Solution: First sketch the solid.

Change to spherical coordinates:

$$\begin{aligned}
 &x^2 + y^2 + z^2 = 8 \\
 &(\text{sphere, radius } \dots) \\
 \Rightarrow &\rho = \dots = \dots
 \end{aligned}$$

$$\begin{aligned}
 &z = \sqrt{x^2 + y^2} \\
 &(\text{cone, angle } \dots) \\
 \Rightarrow &\theta = \dots
 \end{aligned}$$

$$\begin{aligned}
 &z = 1 \text{ (a } \dots) \\
 \Rightarrow &\rho \cos \phi = \dots \\
 \Rightarrow &\rho = \dots
 \end{aligned}$$



$$D : \begin{cases} \dots \leq \theta \leq \dots \\ \dots \leq \phi \leq \dots \\ \dots \leq \rho \leq \dots \end{cases}$$

The mass is

$$\begin{aligned}
 m &= \iiint_D \delta(x,y,z) dV = \int_0^{\dots} \int_0^{\dots} \int_{\dots}^{\dots} \frac{1}{\rho} \underbrace{\dots}_{dV} d\phi d\theta \\
 &= \int_0^{\dots} \int_0^{\dots} \int_{\dots}^{\dots} \dots d\rho d\phi d\theta \\
 &= \int_0^{\dots} \int_0^{\dots} \tan\phi \left[\dots \right]_{\rho=\dots}^{\rho=\dots} d\phi d\theta \\
 &= \int_0^{\dots} d\theta \cdot \int_0^{\dots} \tan\phi (\dots) d\phi \\
 &= \dots \cdot \left\{ \int_0^{\dots} \dots d\phi - \int_0^{\dots} \dots d\phi \right\} \\
 &\quad \uparrow \\
 &\quad \boxed{ \begin{array}{l} u = \dots \\ du = \dots \end{array} } \\
 &= \dots \cdot \left\{ \left[\dots \right]_0^{\dots} - \int_0^{\dots} \dots du \right\} \\
 &= \dots \cdot \left\{ \left[\dots \right] - \left[\dots \right]_0^{\dots} \right\} \\
 &= \dots \left(\dots \right) = \underline{\underline{\dots}}
 \end{aligned}$$

Exercise 6: Change to spherical coordinates and integrate:

$$I = \int_0^{\sqrt{2}} \int_y^{\sqrt{4-y^2}} \int_0^{\sqrt{4-x^2-y^2}} \sqrt{x^2 + y^2 + z^2} \, dz \, dx \, dy$$

Solution: The solid of integration is:

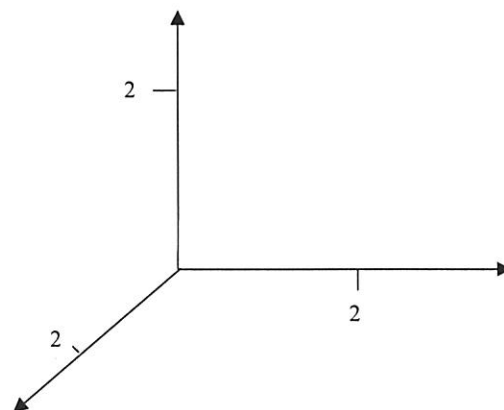
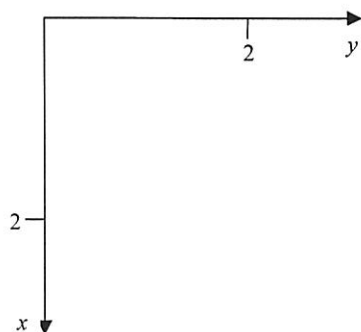
$$D : \begin{cases} \dots \leq y \leq \dots \\ \dots \leq x \leq \dots \\ \dots \leq z \leq \dots \end{cases}$$

$x = y$ is a
 $x = \sqrt{4 - y^2}$ is a
 $z = \sqrt{4 - x^2 - y^2}$ is a

The projection in the xy -plane is:

$$R : \begin{cases} \dots \leq y \leq \dots \\ \dots \leq x \leq \dots \end{cases}$$

Sketch the region R and the solid D :



In spherical coordinates:

$$D : \begin{cases} 0 \leq \theta \leq \dots \\ \dots \leq \phi \leq \dots \\ \dots \leq \rho \leq \dots \end{cases}$$

Therefore

$$\begin{aligned}
 I &= \iiint_D \sqrt{x^2 + y^2 + z^2} \, dV = \int_0^{\dots} \int_{\dots}^{\dots} \int_{\dots}^{\dots} \underbrace{\dots}_{dV} \, d\phi \, d\theta \\
 &= \int_0^{\dots} d\theta \cdot \int_{\dots}^{\dots} \dots \, d\phi \cdot \int_{\dots}^{\dots} \dots \, d\rho \\
 &= \dots \cdot \left[\dots \right] \cdot \left[\dots \right] = \dots \cdot (\dots) \cdot (\dots) = \underline{\dots}
 \end{aligned}$$

Additional Exercises:

1) Change the spherical coordinates to i) Cartesian coordinates, ii) cylindrical coordinates.

a) $(4, \pi/6, \pi/2)$

b) $(1, 3\pi/4, 2\pi/3)$

2) Change the Cartesian coordinates to i) spherical coordinates, ii) cylindrical coordinates

a) $(1, 1, -2\sqrt{2})$

b) $(1, \sqrt{3}, 0)$

3) Sketch the graph of the equation in three dimensions

a) $\rho = 4$

d) $\rho \sec \phi = 6$

g) $\theta = 0$

b) $\phi = \pi/6$

e) $\tan \phi = 2$

h) $\phi = \pi/3$

c) $\theta = \pi/4$

f) $\rho = 4 \sec \phi$

4) Evaluate the given integrals.

e) $\iiint_D x^2 \, dV$

D is in the first octant, and bounded by the sphere $x^2 + y^2 + z^2 = 9$.

f) $\iiint_D z^2 \, dV$

D is bounded below by the cone $z = \sqrt{x^2 + y^2}$ and above by the sphere $x^2 + y^2 + z^2 = 8$.

g) $\iiint_D (x^2 + y^2 + z^2) \, dV$

D is bounded by the cone $z = \sqrt{x^2 + y^2}$ and the plane $z = 2$.

h) $\iiint_D (x + y + z) \, dV$

D is in the first octant, and between the spheres $x^2 + y^2 + z^2 = 4$ and $x^2 + y^2 + z^2 = 16$.

5) Find the volume of the solid D using a triple integral in spherical coordinates.

- D is inside the cone $z = \sqrt{3(x^2 + y^2)}$ and inside the sphere $x^2 + y^2 + z^2 = 16$.
- D is outside the cylinder $x^2 + y^2 = 4$ and inside the sphere $x^2 + y^2 + z^2 = 9$.
- D is outside the cone $z = \sqrt{x^2 + y^2}$, inside the sphere $x^2 + y^2 + z^2 = 9$ and above the xy -plane.
- D is in the first octant, and inside the surfaces $x^2 + y^2 = 4x$ and $x^2 + y^2 + z^2 = 16$.

6) Change to an integral in spherical coordinates, and integrate.

$$\text{a) } \int_0^1 \int_0^{\sqrt{1-x^2}} \int_0^{\sqrt{1-x^2-y^2}} z \, dz \, dy \, dx$$

$$\text{b) } \int_0^4 \int_0^{\sqrt{4-x^2}} \int_0^{\sqrt{4-x^2-y^2}} xyz \, dz \, dy \, dx$$

$$\text{c) } \int_{-3}^3 \int_{-\sqrt{9-y^2}}^{\sqrt{9-y^2}} \int_0^{\sqrt{9-x^2-y^2}} xy \, dz \, dx \, dy$$

$$\text{d) } \int_0^3 \int_0^{\sqrt{9-x^2}} \int_{\sqrt{x^2+y^2}}^{\sqrt{18-x^2-y^2}} x^2 y z \, dz \, dy \, dx$$

$$\text{e) } \int_0^{\sqrt{2}} \int_y^{\sqrt{4-y^2}} \int_0^{\sqrt{4-x^2-y^2}} \sqrt{x^2 + y^2 + z^2} \, dz \, dx \, dy$$

First Order Differential Equations

Recall: We have studied four types of first order differential equations:

1. **Separable Equation.** Can be written as

$$f(y) dy = g(x) dx$$

To solve it, integrate both sides,

$$\int f(y) dy = \int g(x) dx + C$$

2. **Linear Equation.** Can be written (in standard form) as

$$\frac{dy}{dx} + p(x)y = q(x)$$

To solve it, multiply by the integrating factor (I.F.) $e^{\int p(x)dx}$ and use the product rule backwards.

3. **Homogeneous Equation.** Can be written as

$$\frac{dy}{dx} = F\left(\frac{y}{x}\right)$$

To solve it, we change the *dependent* variable y and substitute

$$v = \frac{y}{x} \quad \Rightarrow \quad y = vx \quad \Rightarrow \quad \frac{dy}{dx} = x + v \frac{dv}{dx}$$

4. **Exact Equation.** Is of the form

$$M(x, y) dx + N(x, y) dy = 0 \quad \text{where} \quad \frac{\partial M}{\partial y} = \frac{\partial N}{\partial x}.$$

Its solution is

$$f(x, y) = C$$

where

$$f(x, y) = \int M(x, y) dx + g(y) \quad \text{or} \quad f(x, y) = \int N(x, y) dy + h(x)$$

Exercise 1: Solve $xy' - 4y = 0$.

Solution: This equation is and

First Method: Let us solve it as a equation: Write it as

$$x \frac{dy}{dx} - 4y = 0$$

Then

$$x \frac{dy}{dx} = \dots\dots\dots$$

$$\frac{1}{\dots\dots\dots} dy = \frac{4}{\dots\dots\dots} dx$$

Integrate:

$$\int \frac{1}{\dots\dots\dots} dy = \int \frac{4}{\dots\dots\dots} dx + \dots\dots\dots$$

$$\dots\dots\dots = \dots\dots\dots + C = \dots\dots\dots + C$$

Exponentiate:

$$e^{\ln \dots\dots\dots} = e^{\ln \dots\dots\dots + C} = e^{\ln \dots\dots\dots} \cdot e^C$$

$$|y| = \dots\dots\dots$$

$$y = \pm \dots\dots\dots \quad (\text{set } C_0 = \dots\dots\dots)$$

Answer: $y = C_0 \dots\dots\dots$

Second Method: Solve as a equation:

1. Bring to standard form:

$$\frac{dy}{dx} - \frac{4x}{x} y = 0 \quad (*)$$

2. Find the I.F.

$$\begin{aligned} \int p(x) dx &= \int \dots\dots\dots dx = \dots\dots\dots \int \dots\dots\dots dx \\ &= \dots\dots\dots = \ln(x \dots\dots) \end{aligned}$$

The I.F. is $e^{\ln \dots} = \dots$

3. Multiply (*) by \dots :

$$x^{-4} \frac{dy}{dx} - \dots y = 0$$

4. Product rule backwards:

$$\frac{d}{dx} [x^{-4} \dots] = 0$$

5. Integrate:

$$x^{-4} \dots = \dots$$

Answer: $y = C_0 \dots$

Check: $xy' - 4y = x(\dots) - 4(\dots) = \dots$

Exercise 2: Solve $\sqrt{x} \frac{dy}{dx} - \sqrt{y} = x\sqrt{y}$.

Solution: Separable ? Try to separate the variables.

$$x^{1/2} \frac{dy}{dx} = xy^{1/2} + \dots = (\dots)y^{1/2}$$

We can separate the variables !

$$\dots dy = \dots dx = \dots dx$$

Integrate:

$$\int \dots dy = \int \dots dx + C$$

$$\dots = \dots + C$$

$$y^{1/2} = \dots + C/2$$

Answer: $y = \left(\dots + C_0 \right)^2 \quad (C_0 = C/2)$

Exercise 3: Solve $x \frac{dy}{dx} - 3y = x^2$ (1).

Solution: Separable?
 Homogeneous?
 Linear?

1. Bring to standard form:

$$\frac{dy}{dx} - \dots y = x^{\dots} \quad (2)$$

2. Find the I.F.

$$\begin{aligned} \int p(x) dx &= \int \dots dx = \dots \int \dots dx \\ &= \dots = \ln(x^{\dots}) \end{aligned}$$

The I.F. is $e^{\ln \dots} = \dots$

3. Multiply (2) by the I.F.:

$$x^{-3} \frac{dy}{dx} - \dots y = x^{\dots}$$

4. Product rule backwards:

$$\frac{d}{dx} [x^{-3} \dots] = x^{\dots}$$

5. Integrate:

$$x^{-3} \dots = \int x^{\dots} dx + C = \dots + C$$

6. Solve for y: $y = x^{\dots} (\dots + C) = \dots$

Answer: $y = \dots$

Check: $\frac{dy}{dx} = \dots$

Substitute into (1):

$$\begin{aligned} x [\dots] - 3 [\dots] &= x^2 \\ \dots &= x^2 \end{aligned}$$

Exercise 4: Solve $(x^3 + xy^2) dx = x^2 y dy$.

Solution: Separable?

Linear?

Homogeneous?

Exact?

1. Write as

$$\frac{dy}{dx} = \frac{\quad}{\quad} = \frac{\quad}{\quad} + \frac{\quad}{\quad} = \frac{\quad}{\quad} + \frac{\quad}{\quad}$$

2. Set

$$v = \dots \Rightarrow y = \dots$$

$$\Rightarrow \frac{dy}{dx} = v + \dots$$

We obtain:

$$v + \dots = \dots$$

3. Separate the variables:

$$\dots dv = \dots dx$$

$$\int \dots dv = \int \dots dx + C$$

$$\dots = \dots + C$$

$$v^2 = \dots + 2C$$

$$v = \dots + C_0 \quad (C_0 = 2C)$$

5. Resubstitute:

$$\frac{y}{x} = \sqrt{\dots + C_0}$$

Answer: $y = \dots$

Exercise 5: Solve the initial value problem

$$y' = 1 + x + y + xy, \quad y(0) = 0.$$

Solution: Separable?
 Linear?
 Homogeneous?
 Exact?

1. Solve as a linear equation. Bring the equation to standard form:

$$\frac{dy}{dx} - [\dots\dots\dots]y = 1+x \quad (*)$$

2. Find the I.F: $\int p(x) dx = \int \dots\dots\dots dx = \dots\dots\dots$

The I.F. is $e^{\dots\dots\dots}$

3. Multiply equation (*) by the I.F.:

$$\dots\dots\dots \frac{dy}{dx} + \dots\dots\dots [- (1+x)] y = \dots\dots\dots$$

4. Product rule backwards:

$$\frac{d}{dx} [\dots\dots\dots y] = \dots\dots\dots$$

5. Integrate:

$$e^{-\left(x + \frac{x^2}{2}\right)} y = \int \dots\dots\dots dx + C = \int \dots\dots\dots du + C$$

$u = \dots\dots\dots \Rightarrow du = \dots\dots\dots$
--

$$= \dots\dots\dots + C = C - \dots\dots\dots$$

6. The general solution is: $y = \dots\dots\dots$

7. Use the initial condition $y(0) = 0$: $0 = C e^{\dots\dots\dots} - \dots\dots \Rightarrow C = \dots\dots$

Answer: $y = \dots\dots\dots$

Exercise 6: Solve $(2y^2 - 4x + 5) dx + (4 - 2y + 4xy) dy = 0$.

Solution: Separable?

Linear?

Homogeneous?

Exact? $\frac{\partial M}{\partial y} = \dots\dots\dots$, $\frac{\partial N}{\partial x} = \dots\dots\dots \Rightarrow \dots\dots\dots$

The solution is $f(x, y) = C$ where

$$\frac{\partial f}{\partial x} = M = 2y^2 - 4x + 5 \quad \text{and} \quad \frac{\partial f}{\partial y} = N = 4 - 2y + 4xy$$

To find f , let us integrate M :

$$\begin{aligned} f(x, y) &= \int (\dots\dots\dots) dx + g(\dots\dots) \\ &= \dots\dots\dots + g(\dots\dots) \end{aligned}$$

To find $g(y)$, use $\frac{\partial f}{\partial y} = N(x, y)$:

$$\frac{\partial f}{\partial y} = \dots\dots\dots + g'(\dots\dots) = N(x, y) = \dots\dots\dots$$

Compare:

$$g'(y) = \dots\dots\dots \Rightarrow g(y) = \int (\dots\dots\dots) dy = \dots\dots\dots$$

Therefore,

$$f(x, y) = \dots\dots\dots$$

Answer: = C

Check: The total differential of $f(x, y) = \dots\dots\dots$ is

$$\begin{aligned} df &= \frac{\partial f}{\partial x} dx + \frac{\partial f}{\partial y} dy \\ &= (\dots\dots\dots) dx + (\dots\dots\dots) dy \end{aligned}$$

Exercise 7: Solve $(\sin x \sin y - xe^y) dy = (e^y + \cos x \cos y) dx$.

Solution: Separable?

Linear?

Homogeneous?

Exact? Bring all terms to the left !

$$\underbrace{(\dots\dots\dots)}_{M(x,y)} dx + \underbrace{(\dots\dots\dots)}_{N(x,y)} dy = 0 \quad (*)$$

$$\frac{\partial M}{\partial y} = \dots\dots\dots \quad \frac{\partial N}{\partial x} = \dots\dots\dots \Rightarrow \dots\dots\dots$$

The solution is $f(x,y) = C$ where $\frac{\partial f}{\partial x} = M(x,y)$ and $\frac{\partial f}{\partial y} = N(x,y)$

This time, let us integrate N :

$$\begin{aligned} f(x,y) &= \int (\dots\dots\dots) dy + h(\dots\dots) \\ &= \dots\dots\dots + h(\dots\dots) \end{aligned}$$

To find $h(x)$, use $\frac{\partial f}{\partial x} = M(x,y)$:

$$\frac{\partial f}{\partial x} = \dots\dots\dots + h'(\dots\dots) = M(x,y) = \dots\dots\dots$$

Compare:

$$h'(x) = \dots\dots\dots \Rightarrow h(x) = \dots\dots\dots$$

Therefore,

$$f(x,y) = \dots\dots\dots$$

Answer: = C

Check: The total differential of $f(x,y) = \dots\dots\dots$ is

$$\begin{aligned} df &= \frac{\partial f}{\partial x} dx + \frac{\partial f}{\partial y} dy \\ &= (\dots\dots\dots) dx + (\dots\dots\dots) dy \end{aligned}$$

Additional Exercises:

1) Solve the following differential equations:

a) $y' = \sqrt[3]{64xy}$

b) $y' + y = 1$

c) $y \ln y \, dx - x \, dy = 0$

d) $xy' + y = \cos x$

e) $y' - 2y = e^{3x}$

f) $xyy' = y - 1$

g) $x \frac{dy}{dx} - 3y = x^4$

h) $(1+x^2)y' = \tan^{-1} x$

i) $(1+x^2) \, dy + (1+y^2) \, dx = 0$

j) $y' = y \sin x$

k) $y' + 2xy^2 = 0$

l) $xy' = y + 2(xy)^{1/2}$

m) $\tan \theta \, dr + 2r \, d\theta = 0$

n) $\frac{dy}{dx} - 2xy = 6xe^{x^2}$

o) $x^2y' - 3xy - 2y^2 = 0$

p) $(x+y)y' = x - y$

q) $(x \ln x)y' + y = 3x^3$

r) $xy' = \sqrt{x^2 + y^2}$

s) $2xyy' = x^2 + 2y^2$

t) $y' + y = 2xe^{-x} + x^2$

u) $xy' = y + 2xe^{-y/x}$

v) $y - x + xy \cot x + xy' = 0$

w) $x \sin \frac{y}{x} y' = y \sin \frac{y}{x} + x$

x) $y' + y \cot x = 2x \csc x$

y) $(x^2 - 2y^2) \, dx + xy \, dy = 0$

z) $2\sqrt{x} \frac{dy}{dx} = \sqrt{1-y^2}$

2) Solve the following differential equations:

a) $(2x+3y) \, dx + (3x-4) \, dy = 0$

b) $(3x^2 - 2y^2) \, dx + (6y^2 - 4xy) \, dy = 0$

c) $(y^2 - 1)x \, dx + (x+2)y \, dy = 0$

d) $(\sin x \sin y - xe^y) \, dy = (e^y + \cos x \cos y) \, dx$

e) $(1+x^2) \, dy + 2xy \, dx = \cot x \, dx$

f) $(e^x \sin y + \tan y) \, dx + (e^x \cos y + x \sec^2 y) \, dy = 0$

g) $(x^2 + y/x) \, dx + (y^2 + \ln x) \, dy = 0$

h) $2x(1 + \sqrt{x^2 - y}) \, dx = \sqrt{x^2 - y} \, dy$

i) $(\sin x \tan y + 1) \, dx - \cos x \sec^2 y \, dy = 0$

3) Solve in at least two different ways:

a) $y' + y \tan x = 0$

d) $y' + 2xy = 0$

b) $y' - y \tan x = 0$

e) $xy' = 2x + 3y$

c) $(1+x)\frac{dy}{dx} = 4y$

f) $xy' = x + y$

4) Solve the following initial value problems:

a) $y' = xe^x, \quad y(1) = 3$

b) $y' + 2y = 2, \quad y(0) = 1$

c) $y' = e^{3x-2y}, \quad y(0) = 0$

d) $xy' - y = x, \quad y(1) = 2$

e) $x(x^2 - 4)y' = 1, \quad y(1) = 0$

f) $xyy' = (x+1)(y+1), \quad y(1) = 0$

g) $y' = xe^x, \quad y(1) = 3$

h) $8 \cos^2 y \, dx + \csc^2 x \, dy = 0, \quad y\left(\frac{\pi}{12}\right) = \frac{\pi}{4}$

i) $y' = (1-y) \cos x, \quad y(\pi) = 0$

j) $xy' + 3y = 2x^5, \quad y(2) = 1$

k) $(x^2 + 4)y' + 3xy = x, \quad y(0) = 1$

l) $(\sin x \tan y + 1) \, dx - \cos x \sec^2 y \, dy = 0, \quad y(0) = \frac{\pi}{4}$

Second Order Homogeneous Equations

Recall: Consider the *homogeneous* equation with *constant coefficients*,

$$y'' + by' + cy = 0$$

\uparrow \uparrow ----- constant

Its *characteristic equation*

$$\lambda^2 + b\lambda + c = 0$$

always has two solutions λ_1, λ_2 :

Case 1: $\lambda_1 \neq \lambda_2$ are *real*. (real, distinct roots)

The solution is $y = c_1 e^{\lambda_1 x} + c_2 e^{\lambda_2 x}$

Case 2: $\lambda_1 = \lambda_2 (= \lambda)$ (real, repeated roots)

The solution is $y = c_1 e^{\lambda x} + c_2 x e^{\lambda x}$

Case 3: $\lambda_1, \lambda_2 = r \pm is$ where $s \neq 0$. (complex roots)

The solution is $y = e^{rx} [c_1 \cos(sx) + c_2 \sin(sx)]$

Exercise 1: Find the *general solution* of the given homogeneous equations.

a) $y'' - 5y' + 6y = 0$.

Solution: The characteristic equation is

$$\lambda^2 - \dots = 0$$

$$(\lambda - \dots)(\lambda - \dots) = 0$$

$$\lambda_1 = \dots, \quad \lambda_2 = \dots$$

Answer:

b) $2y'' + 2y' - 3y = 0.$

Solution: The characteristic equation is

$$2\lambda^2 + \dots = 0 \quad (\text{Difficult to factor !})$$

$$\lambda_1, \lambda_2 = \frac{-2 \pm \sqrt{\dots}}{2 \cdot 2} = \frac{-2 \pm \sqrt{\dots}}{\dots} = -\frac{1}{\dots} \pm \frac{\sqrt{\dots}}{\dots}$$

The general solution is $y = c_1 e^{\dots} + c_2 e^{\dots}$

Answer: $y = e^{-x/2} [\dots]$

c) $y'' + 2y' = 0.$

Solution: The characteristic equation is

$$\dots = 0$$

$$\lambda(\dots) = 0 \Rightarrow \lambda_1 = \dots, \quad \lambda_2 = \dots$$

The general solution is $y = c_1 e^{\dots} + c_2 e^{\dots}$

Answer: $y = \dots + c_2 e^{\dots}$

d) $4y'' + 20y' + 25y = 0.$

Solution: The characteristic equation is

$$\dots = 0$$

$$(\lambda + \dots)^2 = 0$$

$$\lambda_1 = \lambda_2 = \dots \quad (\dots \text{ root})$$

The general solution is $y = c_1 \dots + c_2 \dots$

Answer: $y = e^{-5x/2} [\dots]$

e) $y'' - 4y' + 5y = 0.$

Solution: The characteristic equation is

$$\dots\dots\dots = 0 \quad (\text{Difficult to factor !})$$

$$\lambda_{1,2} = \frac{4 \pm \sqrt{\dots\dots\dots}}{2} = \frac{4 \pm \sqrt{\dots\dots\dots}}{2} = \underbrace{2}_{r} \pm \underbrace{\dots\dots\dots}_{s} \cdot i$$

Answer: $y = e^{\dots\dots\dots} [\dots\dots\dots]$

f) $y'' + 9y = 0.$

Solution: The characteristic equation is

$$\dots\dots\dots = 0$$

$$\lambda^2 = \dots\dots\dots \Rightarrow \lambda_{1,2} = \pm \underbrace{\dots\dots\dots}_{s} \cdot i$$

Answer: $y = c_1 \dots\dots\dots + c_2 \dots\dots\dots$

g) $y'' - 9y = 0.$

Solution: The characteristic equation is

$$\dots\dots\dots = 0$$

$$\lambda^2 = \dots\dots\dots \Rightarrow \lambda_1 = \dots\dots, \quad \lambda_2 = \dots\dots$$

Answer: $y = c_1 \dots\dots\dots + c_2 \dots\dots\dots$

Additional Exercises:

1) Solve the following differential equations:

a) $y'' + y' - 6y = 0$

b) $y'' + 2y' + y = 0$

c) $y'' + 8y = 0$

d) $2y'' - 4y' + 8y = 0$

e) $y'' - 4y' + 4y = 0$

f) $y'' - 9y' + 20y = 0$

g) $2y'' + 2y' + 3y = 0$

h) $4y'' - 12y' + 9y = 0$

i) $y'' + y' = 0$

j) $y'' - 6y' + 25y = 0$

k) $4y'' + 20y' + 25y = 0$

l) $y'' + 2y' + 3y = 0$

m) $y'' = 4y$

n) $4y'' - 8y' + 7y = 0$

o) $2y'' + y' - y = 0$

p) $16y'' - 8y' + y = 0$

q) $y'' + 4y' + 5y = 0$

r) $y'' + 4y' - 5y = 0$

2) Solve the following initial value problems:

a) $y'' - 5y' + 6y = 0, \quad y(1) = e^2, \quad y'(1) = 3e^2$

b) $y'' - 6y' + 5y = 0, \quad y(0) = 3, \quad y'(0) = 11$

c) $y'' - 6y' + 9y = 0, \quad y(0) = 0, \quad y'(0) = 5$

d) $y'' + 4y' + 5y = 0, \quad y(0) = 1, \quad y'(0) = 0$

e) $y'' + 4y' + 2y = 0, \quad y(0) = -1, \quad y'(0) = 2 + 3\sqrt{2}$

f) $y'' + 8y' - 9y = 0, \quad y(1) = 2, \quad y'(1) = 0$

Exercise 1 The Method of Undetermined Coefficients

Solution:

Recall: Consider a linear equation with *constant coefficients*.

$$y'' + by' + cy = r(x)$$

\uparrow \uparrow constant

If the force function $r(x)$ is of special form, then *one* solution y_p looks like $r(x)$:

Case 1: $r(x) = ae^{mx}$. Then $y_p = Ae^{mx}$.

Case 2: $r(x) = ax^2 + bx + c$. Then $y_p = Ax^2 + Bx + C$.

Case 3: $r(x) = a \cos(\omega x) + b \sin(\omega x)$ Then $y_p = A \cos(\omega x) + B \sin(\omega x)$.

Exercise 1: Solve $y'' + 4y' + 5y = 2e^{-4x}$ (1).

Solution: 1. Find y_h . The characteristic equation is

$$\lambda^2 + \dots = 0$$

$$\lambda_1, \lambda_2 = \frac{-4 \pm \sqrt{\dots}}{2} = \frac{-4 \pm \sqrt{\dots}}{2} = \underbrace{-2}_r \pm \underbrace{\dots}_s i$$

$$y_h = e^{\dots} [\dots]$$

2. Find y_p . Since $r(x) = \dots$

we choose $y_p = \dots \Rightarrow y_p' = \dots, y_p'' = \dots$

Substitute into (1): $\dots + 4[\dots] + 5[\dots] = 2e^{-4x}$

$$\dots = 2e^{-4x}$$

Compare coefficients: $5A = \dots \Rightarrow A = \dots$

Therefore, $y_p = \dots$

3. **Answer:** The general solution is $y = y_h + y_p$, or

$$y = \underline{\dots + \dots}$$

Exercise 2: Solve $y'' - 3y' + 2y = x^3$ (*).

Solution: 1. Find y_h : The characteristic equation is

$$\lambda^2 - \dots = 0$$

$$(\lambda - \dots)(\lambda - \dots) = 0 \Rightarrow \lambda_1 = \dots, \lambda_2 = \dots$$

$$y_h = c_1 \dots + c_2 \dots$$

2. Find y_p : Since $r(x) = \underbrace{\dots + 0}_{\text{polynomial degree } \dots}$

we choose $y_p = \dots Cx + D$

$$\Rightarrow y_p' = \dots, y_p'' = \dots$$

Substitute into (*):

$$\left[\dots \right] - 3 \left[\dots \right] + 2 \left[\dots \right] = x^3$$

$$\dots x^3 + \left[\dots \right] x^2 + \left[\dots \right] x + \left[\dots \right] = x^3$$

Compare coefficients:

$$x^3: \quad 2A = \dots \Rightarrow A = \dots$$

$$x^2: \quad \dots = 0 \Rightarrow B = \dots = \dots$$

$$x: \quad \dots = 0 \Rightarrow C = \dots = \dots = \dots$$

$$\text{const: } \dots = 0 \Rightarrow D = \dots = \dots = \dots$$

Therefore,

$$y_p = \dots$$

3. **Answer:** The general solution is $y = y_h + y_p$, or

$$\underline{y = \dots + \dots}$$

Exercise 3: Solve $y'' + 2y' + y = 3\cos 3x$ (*).

Solution: 1. Find y_h : The characteristic equation is

$$\lambda^2 + \dots = 0$$

$$(\lambda + \dots)(\lambda + \dots) = 0 \Rightarrow \lambda_1 = \lambda_2 = \dots$$

$$y_h = c_1 \dots + c_2 \dots$$

2. Find y_p : Since $r(x) = \dots + 0 \cdot \sin 3x$

we choose $y_p = \dots + \dots$

$$\Rightarrow y_p' = \dots$$

$$\Rightarrow y_p'' = \dots$$

Substitute into (*):

$$\left[\dots \right] + 2 \left[\dots \right]$$

$$+ \left[\dots \right] = 3\cos 3x$$

$$\left[\dots \right] \cos 3x + \left[\dots \right] \sin 3x = 3\cos 3x$$

Compare coefficients:

$$\cos 3x: \dots = \dots \quad (1)$$

$$\sin 3x: \dots = 0 \Rightarrow 8B = \dots, B = \dots$$

Substitute $B = \dots$ into (1),

$$-8A + 6 \dots = 3 \Rightarrow \dots A = 3, A = \dots = \dots$$

$$\Rightarrow B = \dots = \dots$$

$$y_p = \dots$$

3. **Answer:** The general solution is $y = y_h + y_p$, or

$$\underline{\underline{y = e^{-x} [\dots] - \dots}}$$

Exercise 4: Consider $y'' + y' - 6y = r(x)$.

Find the solution y_h of the related homogenous equation.

Then find the correct choice of y_p for the given force function $r(x)$.

Solution: Find y_h : The characteristic equation is

$$\lambda^2 + \dots = 0$$

$$(\lambda + \dots)(\lambda + \dots) = 0 \Rightarrow \lambda_1 = \dots, \lambda_2 = \dots$$

$$y_h = c_1 \dots + c_2 \dots$$

a) $r(x) = e^{-2x}$.

Solution: We choose $y_p = \dots$

Compare with y_h : \dots

Answer: $y_p = \dots$

b) $r(x) = e^{2x}$.

Solution: We choose $y_p = \dots$

Compare with y_h : \dots

Answer: $y_p = \dots$

c) $r(x) = e^{4x} + 2e^{-3x}$.

Solution: We choose $y_p = \dots$

Compare with y_h : \dots

Answer: $y_p = \dots$

d) $r(x) = \underbrace{x^2 + x}_{\dots} + 2e^{-3x}$.

Solution: We choose $y_p = \dots$

Compare with y_h : \dots

Answer: $y_p = \dots$

e) $r(x) = \underbrace{x^2}_{\dots} e^{2x}.$

Solution: We choose $y_p = \dots\dots\dots$

Compare with $y_h : \dots\dots\dots$
 $\dots\dots\dots$

Answer: $y_p = \dots\dots\dots$

f) $r(x) = 2 \cosh 3x.$

Solution: First write $r(x) = \dots\dots\dots = \dots\dots\dots$

We therefore choose $y_p = \dots\dots\dots$

Compare with $y_h : \dots\dots\dots$

Answer: $y_p = \dots\dots\dots$

Exercise 5: Consider $y'' + 4y = r(x).$

Find the solution y_h of the related homogenous equation.
 Then find the correct choice of y_p for the given force function $r(x).$

Solution: Find y_h . The characteristic equation is

$$\lambda^2 + \dots\dots\dots = 0$$

$$\lambda^2 = \dots\dots\dots \Rightarrow \lambda_1, \lambda_2 = \dots\dots\dots = \dots\dots\dots$$

$$y_h = c_1 \dots\dots\dots + c_2 \dots\dots\dots$$

a) $r(x) = e^{2x} \cos x.$

Solution: We choose $y_p = \dots\dots\dots$

Compare with $y_h : \dots\dots\dots$

Answer: $y_p = \dots\dots\dots$

b) $r(x) = \cos 2x - \sin 2x.$

Solution: We choose $y_p = \dots\dots\dots$

Compare with $y_h : \dots\dots\dots$

Answer: $y_p = \dots\dots\dots$

c) $r(x) = \cos x + \cos 2x.$

Solution: We choose $y_p = \dots\dots\dots$

Compare with $y_h : \dots\dots\dots$

Answer: $y_p = \dots\dots\dots$

d) $r(x) = e^x \cos 2x.$

Solution: We choose $y_p = \dots\dots\dots$

Compare with $y_h : \dots\dots\dots$

Answer: $y_p = \dots\dots\dots$

e) $r(x) = x \cos 2x - \sin 2x.$

Solution: We choose $y_p = \dots\dots\dots$

Compare with $y_h : \dots\dots\dots$

$\dots\dots\dots$

Answer: $y_p = \dots\dots\dots$

f) $r(x) = \sinh 2x.$

Solution: First write $r(x) = \dots\dots\dots$

We therefore choose $y_p = \dots\dots\dots$

Compare with $y_h : \dots\dots\dots$

Answer: $y_p = \dots\dots\dots$

Additional Exercises:

1) Find the general solution:

a) $y'' + 4y' + 5y = e^{3x}$

d) $y'' - 4y = 4x^2 + 4x + 6$

b) $2y'' + 2y' - 4y = e^{-x}$

e) $y'' - 3y' + 2y = x^3$

c) $y'' + 5y' + 4y = \cos x$

f) $y'' + 2y' = 3 \sin x - \cos x$

2) Find the general solution:

a) $y'' - 2y' - 3y = 3e^{2x}$

g) $y'' + y = 3 \sin 2x + x \cos 2x$

b) $y'' - 2y' - 3y = -3xe^{-x}$

h) $2y'' + 3y' + y = x^2 + 3 \sin x$

c) $y'' + 2y' + 5y = 3 \sin 2x$

i) $y'' + \omega_0^2 y = \cos \omega x \quad (\omega_0^2 \neq \omega^2)$

d) $y'' + 2y' = 3 + 4 \sin 2x$

j) $y'' + \omega_0^2 y = \cos \omega_0 x$

e) $y'' + 9y = x^2 e^{3x} + 6$

k) $y'' - y' + 4y = 2 \sinh x$

f) $y'' + 2y' + y = 2e^{-x}$

l) $y'' - y' - 2y = \cosh 2x$

3) Find the general solution:

a) $y'' + 4y = 4 \cos 2x + 6 \cos x + 8x^2 - 4x$

b) $y'' + 9y = 2 \sin 3x + 4 \sin x - 26e^{-2x} + 27x^3$

4) Solve the following initial value problems:

a) $y'' + y' - 2y = 2x, \quad y(0) = 0, \quad y'(0) = 1$

b) $y'' + 4y = x^2 + 3e^x, \quad y(0) = 0, \quad y'(0) = 2$

c) $y'' - 2y' + y = xe^x + 4, \quad y(0) = 1, \quad y'(0) = 1$

d) $y'' - 2y' - 3y = 3xe^{2x}, \quad y(0) = 1, \quad y'(0) = 0$

e) $y'' + 4y = 3 \sin 2x, \quad y(0) = 2, \quad y'(0) = -1$

f) $y'' + 2y' + 5y = 4e^{-x} \cos 2x, \quad y(0) = 1, \quad y'(0) = 0$

5) Specify the general form of y_p . No need to find the values of A, B, C, \dots

a) $y'' + 3y' = 2x^4 + x^2 e^{-3x} + \sin 3x$

b) $y'' + y = x(1 + \sin x)$

c) $y'' - 5y' + 6y = e^x \cos 2x + e^{2x} (3x + 4) \sin x$

d) $y'' + 2y' + 2y = 3e^{-x} + 2e^{-x} \cos x + 4e^{-x} x^2 \sin x$

e) $y'' - 4y' + 4y = 2x^2 + 4xe^{2x} + x \sin 2x$

f) $y'' + 4y = x^2 \sin 2x + (6x + 7) \cos 2x$

g) $y'' + 3y' + 2y = e^x (x^2 + 1) \sin 2x + 3e^{-x} \cos x + 4e^x$

h) $y'' + 2y' + 5y = 3xe^{-x} \cos 2x - 2xe^{-2x} \cos x$

The Method of Variation of Parameters

Recall: Consider a linear equation with *arbitrary coefficients*.

$$a(x)y'' + b(x)y' + c(x)y = r(x)$$

$\uparrow \quad \uparrow \quad \uparrow$

variable

If the solution of the related homogeneous equation is

$$y_h = c_1y_1 + c_2y_2$$

Then we look for one solution y_p of the form

$$y_p = u(x)y_1(x) + v(x)y_2(x).$$

To find $u'(x)$ and $v'(x)$, we solve the system

$$\begin{bmatrix} y_1 & y_2 \\ y_1' & y_2' \end{bmatrix} \begin{bmatrix} u' \\ v' \end{bmatrix} = \begin{bmatrix} 0 \\ \frac{r(x)}{a(x)} \end{bmatrix}.$$

Exercise 1: Find the general solution of $y'' + 4y = \tan x$.

Solution: 1. Find y_h : The characteristic equation is

$$\lambda^2 + \dots = 0 \quad \Rightarrow \quad \lambda^2 = \dots \quad \Rightarrow \quad \lambda_1, \lambda_2 = \dots$$

$$y_h = c_1 \cos 2x + c_2 \dots$$

2. Find y_p :

Question: Can we expect $y_p = A \tan 2x$?

Answer:

Use variation of parameters. Set

$$y_p = u \underbrace{\cos 2x}_{y_1} + v \underbrace{\dots\dots\dots}_{y_2}$$

and solve the system

$$\begin{bmatrix} y_1 & y_2 \\ \dots & \dots \end{bmatrix} \begin{bmatrix} \dots \\ \dots \end{bmatrix} = \begin{bmatrix} 0 \\ \dots \end{bmatrix}$$

Here,

$$\begin{bmatrix} \dots & \dots \\ \dots & \dots \end{bmatrix} \begin{bmatrix} u' \\ v' \end{bmatrix} = \begin{bmatrix} 0 \\ \dots \end{bmatrix}$$

Let us use Cramer's Rule. The determinant of this matrix is

$$W = \begin{vmatrix} \dots & \dots \\ \dots & \dots \end{vmatrix} = 2 \cos^2 2x + \dots = \dots$$

Then

$$u' = \frac{\begin{vmatrix} \dots & \sin 2x \\ \dots & 2 \cos 2x \end{vmatrix}}{W} = \frac{\dots}{2} = \dots$$

$$v' = \frac{\begin{vmatrix} \dots & \dots \\ \dots & \dots \end{vmatrix}}{W} = \frac{\dots}{\dots} = \frac{1}{2} \dots$$

Integrate

$$\begin{aligned}
 u &= -\frac{1}{2} \int \dots\dots\dots dx = -\frac{1}{2} \int \frac{\dots\dots\dots}{\cos 2x} dx \\
 &= -\frac{1}{2} \int \frac{1 - \dots\dots\dots}{\cos 2x} dx = -\frac{1}{2} \int \left[\sec 2x - \dots\dots\dots \right] dx \\
 &= -\frac{1}{2} \left[\frac{1}{2} \ln \left| \dots\dots\dots \right| - \frac{1}{2} \dots\dots\dots \right] \\
 &= \frac{1}{4} \left[\sin 2x - \dots\dots\dots \right]
 \end{aligned}$$

$$v = \frac{1}{2} \int \dots\dots\dots dx = -\frac{1}{4} \dots\dots\dots$$

Therefore,

$$\begin{aligned}
 y_p &= u \cos 2x + v \sin 2x \\
 &= \frac{1}{4} \left[\dots\dots\dots \right] \cos 2x - \frac{1}{4} \dots\dots\dots \sin 2x \\
 &= -\frac{1}{4} \dots\dots\dots
 \end{aligned}$$

3. **Answer:** The general solution is $y = y_h + y_p$, or

$$\underline{y = c_1 \cos 2x + c_2 \sin 2x - \dots\dots\dots}$$

Exercise 2: Solve the IVP

$$y'' + 4y' + 4y = \frac{e^{-2x}}{1+x^2}, \quad y(0)=1, \quad y'(0)=0.$$

Solution: 1. Find y_h : The characteristic equation is

$$\lambda^2 + \dots = 0$$

$$(\lambda + \dots)(\lambda + \dots) = 0 \Rightarrow \lambda_1, \lambda_2 = \dots \text{ (} \dots \text{ root)}$$

$$y_h = c_1 \dots + c_2 \dots$$

2. Find y_p : Question: Can we expect $y_p = A \frac{e^{-2x}}{1+x^2}$???

Answer:

Use variation of parameters. Set

$$y_p = u \underbrace{\dots}_{y_1} + v \underbrace{\dots}_{y_2}$$

and solve the system

$$\begin{bmatrix} e^{-2x} & \dots \\ \dots & \dots \end{bmatrix} \begin{bmatrix} u' \\ v' \end{bmatrix} = \begin{bmatrix} 0 \\ \dots \end{bmatrix}$$

Write as two equations:

$$e^{-2x} u' + \dots v' = 0 \tag{1}$$

$$-2e^{-2x} u' + \dots v' = \dots \tag{2}$$

Cut e^{-2x} . (1) gives

$$u' = \dots \tag{3}$$

Substitute into (2):

$$-2(\dots) + \dots v' = \frac{1}{1+x^2}$$

$$\Rightarrow v' = \dots$$

Substitute into (3):

$$u' = \dots$$

Integrate:

$$u = \int \frac{x}{1+x^2} dx = \dots\dots\dots \quad \left(\text{Use } \int \frac{f'}{f} = \dots\dots\dots \right)$$

$$v = \int \frac{1}{\dots\dots\dots} dx = \dots\dots\dots$$

Therefore,

$$y_p = ue^{-2x} + vxe^{-2x} \\ = \dots\dots\dots$$

3. The general solution is $y = y_h + y_p$, or

$$y = c_1e^{-2x} + c_2 \dots\dots\dots + \dots\dots\dots$$

$$y = e^{-2x} \left[c_1 + c_2x + \dots\dots\dots \right]$$

4. Use the initial conditions $y(0) = 1, y'(0) = 0$

$$y(0) = 1 \text{ gives } \dots\dots\dots = 1 \\ \Rightarrow c_1 = \dots\dots\dots$$

Differentiate y using the product rule.

$$y' = -2e^{-2x} \left[c_1 + c_2x + \dots\dots\dots \right]$$

$$+ e^{-2x} \left[c_2 + \dots\dots\dots \right]$$

$$y'(0) = 0 \text{ gives } \dots\dots\dots = 0 \\ \Rightarrow c_2 = \dots\dots\dots$$

Answer: $y = e^{-2x} \left[\dots\dots\dots + x \tan^{-1} x - \frac{1}{2} \ln(1+x^2) \right]$

Additional Exercises:

1) Find the general solution:

a) $y'' + y = \tan x$

b) $y'' + 4y' + 4y = x^{-2}e^{-2x}$

c) $y'' + 9y = 9 \sec^2 3x$

d) $y'' + 4y = \tan 2x$

e) $y'' + 2y' + y = e^{-x} \ln x$

f) $4y'' + y = 2 \sec(x/2)$

g) $y'' + 4y = 3 \csc 2x$

h) $y'' - 2y' + y = \frac{e^x}{1+x^2}$

i) $y'' - 2y' - 3y = 64xe^{-x}$

j) $y'' + 2y' + 5y = e^{-x} \sec 2x$

k) $y'' - 3y' + 2y = (1 + e^{-x})^{-1}$

2) Solve each equation twice: Using the method of undetermined coefficients, and using the method of variation of parameters.

a) $y'' - 5y' + 6y = 2e^x$

c) $y'' - y' - 2y = 2e^{-x}$

b) $y'' + 2y' + y = 3e^{-x}$

d) $4y'' - 4y' + y = 16e^{x/2}$

3) Show that the equation $y'' + y = f(x)$ has general solution

$$y = c_1 \cos x + c_2 \sin x + \int_{x_0}^x f(t) \sin(x-t) dt$$

The Laplace Transform

$f(x)$	$F(s)$
1	$\frac{1}{s}$
x^n	$\frac{n!}{s^{n+1}}$
e^{cx}	$\frac{1}{s-c}$
$\cos ax$	$\frac{s}{s^2+a^2}$
$\sin ax$	$\frac{a}{s^2+a^2}$
$e^{cx} f(x)$	$F(s-c)$
$x f(x)$	$-F'(s)$
$y'(x)$	$sY(s) - y(0)$
$y''(x)$	$s^2Y(s) - sy'(0) - y(0)$

Exercise 1: Find the Laplace transforms of the given functions.

a) $f(x) = 3x + 4e^{2x} - 2.$

Solution: $F(s) = 3 \frac{1}{\dots\dots\dots} + 4 \frac{1}{\dots\dots\dots} - 2 \frac{1}{\dots\dots\dots}$

Answer: $F(s) = \underline{\underline{\dots\dots\dots}}$

b) $f(x) = \sin 3x - 2\cos 3x + 2\sin 4x + \cos 4x.$

Solution:

$$F(s) = \frac{\quad}{s^2 + \dots} - 2\frac{\quad}{s^2 + \dots} + 2\frac{\quad}{s^2 + \dots} + \frac{\quad}{s^2 + \dots}$$

Answer:
$$\underline{\underline{F(s) = \frac{\quad}{s^2 + \dots} + \frac{\quad}{s^2 + \dots}}}$$

c) $f(x) = e^{2x} \cosh 3x + e^{3x} \sinh 2x.$

Solution: Write

$$f(x) = e^{2x} \frac{\quad}{2} + e^{3x} \frac{\quad}{2}$$

$$f(x) = \dots e^{5x} - \dots e^x + \dots e^{-x}$$

Then

$$F(s) = \frac{1}{\dots s - \dots} - \frac{1}{\dots s - \dots} + \frac{1}{\dots s - \dots}$$

Answer:

$$\underline{\underline{F(s) = \frac{1}{s - \dots} - \frac{1}{\dots(s - \dots)} + \frac{1}{\dots(s + \dots)}}}$$

d) $f(x) = e^{2x}(\cos 3x - 2\sin 3x).$

Solution: Because

$$\cos 3x - 2\sin 3x \leftrightarrow \dots = \frac{\quad}{s^2 + 9}$$

Then

$$e^{2x}(\cos 3x - 2\sin 3x) \leftrightarrow \frac{\quad}{(s^2 - \dots)^2 + \dots}$$

Answer
$$\underline{\underline{F(s) = \frac{\quad}{(s^2 - \dots)^2 + \dots}}}$$

e) $f(x) = x \sin x.$

Solution: Because $\sin x \leftrightarrow \dots\dots\dots$

Then $x \sin x \leftrightarrow -\frac{d}{ds} \frac{1}{s^2 + 1} = -\frac{1}{(s^2 + 1)^2}$

Answer:
$$\underline{\underline{F(s) = -\frac{1}{(s^2 + 1)^2}}}$$

Exercise 2: Find the inverse Laplace transforms of the given functions.

a) $F(s) = \frac{4}{s^2} - \frac{2}{s+3} + \frac{4s+1}{s^2+4}.$

Solution: Write

$$F(s) = \dots \frac{1}{s^2} - \dots \frac{1}{s - (\dots)} + \dots \frac{s}{s^2 + 4} + \dots \frac{2}{s^2 + 4}$$

Then

$$f(x) = \dots - \dots + \dots + \dots$$

Answer:
$$\underline{\underline{f(x) = \dots - \dots + \dots + \dots}}$$

b) $F(s) = \frac{12}{s^4}.$

Solution: By the table, $x^n \leftrightarrow \dots\dots\dots$

Write

$$F(s) = \frac{12}{s^4} = \frac{12}{\dots} \frac{3!}{s^4} = \dots \frac{3!}{s^4} \leftrightarrow \dots\dots\dots$$

Answer:
$$\underline{\underline{f(x) = \dots\dots\dots}}$$

c) $F(s) = \frac{2s+6}{s^3+9s}$.

Solution: Do a partial fraction decomposition.

$$\begin{aligned} \frac{2s+6}{s^3+9s} &= \frac{2s+6}{s(\dots\dots)} = \frac{A}{\dots\dots} + \frac{\dots\dots}{\dots\dots\dots\dots} \\ 2s+6 &= A(\dots\dots\dots) + (\dots\dots\dots)\dots\dots \\ &= (\dots\dots\dots)s^2 + (\dots\dots\dots)s + (\dots\dots\dots) \end{aligned}$$

Compare coefficients:

$$\begin{aligned} s^2: \quad A+B &= \dots\dots \Rightarrow B = \dots\dots = \dots\dots \\ s: \quad C &= \dots\dots \\ \text{const:} \quad 9A &= \dots\dots \Rightarrow A = \dots\dots \end{aligned}$$

$$\Rightarrow F(s) = \frac{\dots\dots}{s} + \frac{\dots\dots}{s^2+9} = \frac{2}{3} \left[\frac{\dots\dots}{s} - \frac{\dots\dots}{s^2+9} + \frac{\dots\dots}{s^2+9} \right]$$

Answer: $f(x) = \frac{2}{3} [\dots\dots - \dots\dots]$

d) $F(s) = \frac{s-1}{(s+2)^3}$.

Solution: The partial fraction decomposition is easy. Write

$$\begin{aligned} F(s) &= \frac{s-1}{(s+2)^3} = \frac{(s+\dots\dots-\dots\dots)-1}{(s+2)^3} = \frac{(s+\dots\dots)-\dots\dots}{(s+2)^3} \\ &= \frac{s+2}{(s+2)^3} - \frac{\dots\dots}{(s+2)^3} = \frac{1}{\dots\dots\dots} - \frac{\dots\dots}{(s+2)^3} \end{aligned}$$

We know (cut the 2):

$$\begin{aligned} \frac{1}{s^2} &\leftrightarrow \dots\dots \quad \text{and} \quad \frac{3}{s^3} = \frac{3}{\dots\dots} \frac{2!}{s^3} \leftrightarrow \dots\dots \\ \Rightarrow \frac{1}{(s+2)^2} - \frac{3}{(s+2)^3} &\leftrightarrow \dots\dots\dots \end{aligned}$$

Answer: $f(x) = e^{2x} [\dots\dots - \dots\dots]$

e)
$$F(s) = \frac{4 - 11s}{(s^2 + s)(s^2 + 4)}$$

Solution: Factor the denominator and do a partial fraction decomposition.

$$F(s) = \frac{4 - 11s}{(\dots)(\dots)(s^2 + 4)} = \frac{A}{\dots} + \frac{\dots}{\dots} + \frac{\dots}{\dots}$$

Multiply by

$$\begin{aligned} 4 - 11s &= A(\dots)(\dots) + Bs(\dots) + (Cs + D)s(\dots) \\ &= (\dots)s^2 + (\dots)s + (\dots) \end{aligned}$$

$$s = 0: \quad \dots = \dots \Rightarrow A = \dots$$

$$s = \dots: \quad \dots = \dots \Rightarrow B = \dots$$

$$\begin{aligned} s = \dots: \quad \dots &= 10A + 5B + \dots \\ \dots &= \dots + \dots \\ \dots &= 2C + 2D \\ \dots &= C + D \quad (1) \end{aligned}$$

$$\begin{aligned} s = \dots: \quad \dots &= 24A + 16B + \dots \\ \dots &= \dots + \dots \\ \dots &= \dots + \dots \\ \dots &= 2C + D \quad (2) \end{aligned}$$

$$(1) - (2): \quad -3 = \dots \Rightarrow C = \dots$$

$$\text{Then (1) gives } D = -1 - \dots = \dots \Rightarrow D = \dots$$

$$\begin{aligned} \text{Thus, } F(s) &= \frac{\dots}{s} + \frac{\dots}{s+1} + \frac{\dots}{s^2+4} \\ &= \frac{\dots}{s} - \dots \frac{\dots}{s+1} + \dots \frac{s}{s^2+4} - \dots \frac{\dots}{s^2+4} \end{aligned}$$

Answer:
$$f(x) = \dots - \dots + \dots + \dots$$

f) $F(s) = \frac{3s + 5}{s^2 - 6s + 25}$.

Solution: Can we factor the denominator ?

$$b^2 - 4ac = \dots\dots\dots = \dots\dots < 0 \dots\dots\dots$$

Therefore, complete the square.

$$\begin{aligned} F(s) &= \frac{3s + 5}{s^2 - 6s + 25} = \frac{3s + 5}{(s^2 - 6s + \dots\dots) + 25 - \dots\dots} \\ &= \frac{3s + 5}{(s - \dots\dots)^2 + \dots\dots} \\ &= \frac{3(s - \dots\dots + \dots\dots) + 5}{(s - \dots\dots)^2 + \dots\dots} = \frac{3(s - \dots\dots) + \dots\dots}{(s - \dots\dots)^2 + \dots\dots} \\ &= 3 \frac{s - \dots\dots}{(s - \dots\dots)^2 + \dots\dots} + \frac{14}{\dots\dots (s - \dots\dots)^2 + \dots\dots} \end{aligned}$$

We know:

$$3 \frac{s}{s^2 + \dots\dots} + \frac{7}{\dots\dots s^2 + \dots\dots} \leftrightarrow 3 \dots\dots + \frac{7}{\dots\dots} \dots\dots\dots$$

Answer: $f(x) = \dots\dots \left(\dots\dots + \dots\dots \right)$

Exercise 3: Solve the IVP by the Laplace transform method:

$$y'' - 3y' + 2y = 4x, \quad y(0) = 2, \quad y'(0) = -1 \quad (*)$$

Solution: By the table: If

$$y(x) \leftrightarrow Y(s)$$

then

$$y'(x) \leftrightarrow sY(s) - \dots\dots = \dots\dots\dots$$

$$y''(x) \leftrightarrow s^2Y(s) - \dots\dots - \dots\dots = \dots\dots\dots$$

The Laplace transform of equation (*) is

$$\left[s^2 Y(s) - \dots \right] - 3 \left[s Y(s) - \dots \right] + \dots = \dots$$

Solve for $Y(s)$:

$$Y(s) \left[s^2 - \dots \right] - \dots + \dots = \dots$$

$$Y(s) \left[s^2 - \dots \right] = \dots - \dots + \frac{4}{s^2}$$

$$= \frac{\dots}{s^2} - \frac{\dots}{s^2} + \frac{4}{s^2} = \frac{\dots}{s^2}$$

$$Y(s) = \frac{\dots}{s^2 (\dots)} = \frac{\dots}{s^2 (\dots)(\dots)}$$

$$= \frac{A}{s} + \frac{B}{\dots} + \frac{C}{s-1} + \frac{D}{\dots}$$

Multiply by

$$2s^3 - 7s^2 + 4 = As(\dots)(\dots) + B(\dots)(\dots) + Cs^2(\dots) + Ds^2(\dots)$$

$$s=0: \dots = 4 \Rightarrow \boxed{B = \dots}$$

$$s=1: \dots = -1 \Rightarrow \boxed{C = \dots}$$

$$s=2: \dots = \dots \Rightarrow \boxed{D = \dots}$$

$$s=\dots: \dots = \dots \Rightarrow \dots = \dots$$

$$\dots = \dots$$

$$\dots = \dots$$

$$\boxed{A = \dots}$$

Therefore,

$$Y(s) = \frac{3}{s} + \frac{\dots}{\dots} + \frac{1}{s-1} - \frac{2}{\dots}$$

Answer: $y = \dots + \dots + \dots - \dots$

Exercise 4: Solve the IVP by the Laplace transform method:

$$y'' - 2y' + y = 2\cos x, \quad y(0) = 1, \quad y'(0) = -2 \quad (*)$$

Solution: By the table: If

$$y(x) \leftrightarrow Y(s)$$

then

$$y'(x) \leftrightarrow sY(s) - \dots = \dots$$

$$y''(x) \leftrightarrow s^2Y(s) - \dots - \dots = \dots$$

The Laplace transform of equation (*) is

$$\left[s^2Y(s) - \dots \right] - 2\left[sY(s) - \dots \right] + \dots = \dots$$

Solve for $Y(s)$:

$$Y(s) \left[s^2 - \dots \right] - \dots + \dots = \dots$$

$$Y(s) \left[s^2 - \dots \right] = \dots - \dots + \frac{2s}{s^2 + 1}$$

$$= \frac{(\dots)(s^2 + 1)}{s^2 + 1} + \frac{2s}{s^2 + 1} = \frac{\dots}{s^2 + 1}$$

$$Y(s) = \frac{\dots}{(\dots)(s^2 + 1)} = \frac{\dots}{(\dots)^2 (s^2 + 1)}$$

$$= \frac{A}{\dots} + \frac{\dots}{(\dots)^2} + \frac{\dots}{\dots}$$

Multiply by

$$\begin{aligned}
s^3 - 4s^2 + 3s - 4 &= A(\dots)(\dots) + B(\dots) + (Cs + D)(\dots)^2 \\
&= A(\dots) + B(\dots) \\
&\quad + C(\dots) + D(\dots) \\
&= (\dots)s^3 + (\dots)s^2 + (\dots)s + \dots
\end{aligned}$$

Set $s=1$:

$$\dots = \dots \Rightarrow \boxed{B = \dots} \quad (1)$$

Compare coefficients:

$$s^3: \quad \dots = \dots \quad (2)$$

$$s^2: \quad \dots = \dots$$

$$\stackrel{(1)}{\Rightarrow} -2 = \dots \quad (3)$$

$$s: \quad \dots = \dots \quad (4)$$

$$\text{const:} \quad -4 = \dots$$

$$\stackrel{(1)}{\Rightarrow} -2 = \dots \quad (5)$$

$$(4) - (2): \quad \dots = \dots \Rightarrow \boxed{D = \dots}$$

$$(5): \quad A = \dots \Rightarrow \boxed{A = \dots}$$

$$(2): \quad C = \dots \Rightarrow \boxed{C = \dots}$$

Therefore,

$$Y(s) = \frac{\dots}{\dots} - 2 \frac{\dots}{(s-1)^2} - \frac{\dots}{s^2+1}$$

Note that $\frac{1}{(s-1)^2} \leftrightarrow \dots$

Answer: $y = \dots - 2 \dots - \dots - \dots$

Additional Exercises:

1) Find the Laplace transforms:

a) $f(x) = 2x^3 - 4x^2 + 2x - e^{2x}$

b) $f(x) = (x-1)^2$

c) $f(x) = xe^{4x}$

d) $f(x) = x \cos 2x$

e) $f(x) = \sin^2 3x$

f) $x^2 \sin ax$

g) $xe^{-2x} \cos 4x$

h) $f(x) = x^5 + \cos 2x + 10$

i) $f(x) = x^3 e^{-x} + e^{2x} \cos 2x$

j) $f(x) = 4 \sin x \cos x + 2e^{-x}$

2) Find the inverse Laplace transform:

a) $\frac{30}{s^4}$

f) $\frac{(s+1)^3}{(s-4)^4}$

k) $\frac{2s-3}{s^2-4}$

p) $\frac{1}{s^3-5s^2}$

b) $\frac{4}{s-1} + \frac{6}{s^2+9}$

g) $\frac{1}{s^2(s^2-a^2)}$

l) $\frac{8s^2-4s+12}{s(s^2+4)}$

q) $\frac{1}{s^4-16}$

c) $\frac{3}{s^2+5s}$

h) $\frac{1}{s(s+1)(s+2)}$

m) $\frac{1-2s}{s^2+4s+5}$

r) $\frac{1}{s(s^2-9)}$

d) $\frac{-3}{s^4+s^2}$

i) $\frac{2}{s^2+3s-4}$

n) $\frac{2s-3}{9s^2-12s+20}$

s) $\frac{1}{(s^2+s-6)^2}$

e) $\frac{2s+1}{s(s^2+9)}$

j) $\frac{3s}{s^2-s-6}$

o) $\frac{3s+5}{s^2-6s+25}$

t) $\frac{s^2-2s}{s^4+5s^2+4}$

3) Solve each following initial value problem using the Laplace transform method:

a) $y'' - y' - 6y = 0 \quad y(0) = 1, \quad y'(0) = -1$

b) $y'' + 3y' + 2y = 0 \quad y(0) = 1, \quad y'(0) = 0$

c) $y'' + y' - 2y = 2e^{-x} \quad y(0) = 1, \quad y'(0) = 0$

d) $y'' + 4y = x^2 \quad y(0) = 0, \quad y'(0) = 2$

e) $y'' - 2y' - 3y = \sin x \quad y(0) = \frac{1}{2}, \quad y'(0) = \frac{1}{5}$

f) $y'' - 2y' + 2y = 0 \quad y(0) = 0, \quad y'(0) = 1$

g) $y'' - 4y' + 4y = 0 \quad y(0) = 1, \quad y'(0) = 1$

h) $y'' - 2y' - 2y = 0 \quad y(0) = 2, \quad y'(0) = 0$

i) $y'' + 2y' + 5y = 0 \quad y(0) = 2, \quad y'(0) = -1$

j) $y'' - 2y' + 2y = \cos x \quad y(0) = 1, \quad y'(0) = 0$

k) $y'' - 2y' + 2y = e^{-x} \quad y(0) = 0, \quad y'(0) = 1$

l) $y'' - 6y' + 8y = 2 \quad y(0) = 0, \quad y'(0) = 0$

m) $y'' + 2y' + y = 4e^{-x} \quad y(0) = 2, \quad y'(0) = -1$

n) $y'' - 4y = 3x \quad y(0) = 0, \quad y'(0) = 0$